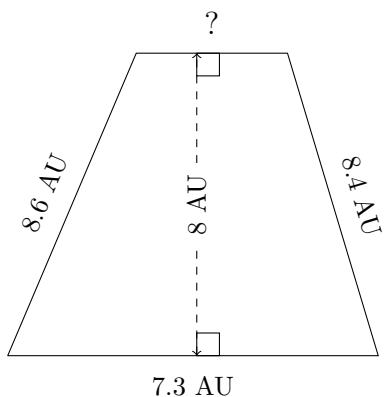


Trapezium Measurements (G)

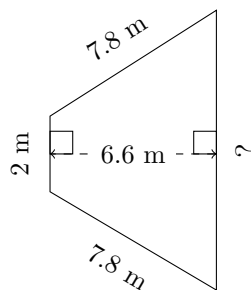
Calculate the missing measurements for each trapezium.

1.



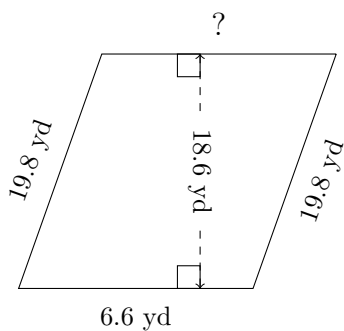
$P = 27.1 \text{ AU}$
 $A = ?$

2.



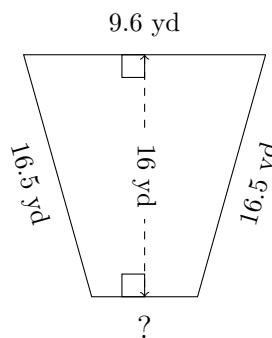
$P = 25.1 \text{ m}$
 $A = ?$

3.



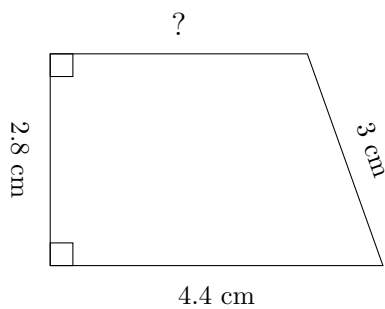
$P = 55.8 \text{ yd}$
 $A = ?$

4.



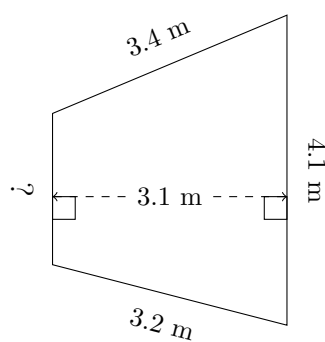
$P = 46.8 \text{ yd}$
 $A = ?$

5.



$P = 13.6 \text{ cm}$
 $A = ?$

6.



$P = 12.7 \text{ m}$
 $A = ?$