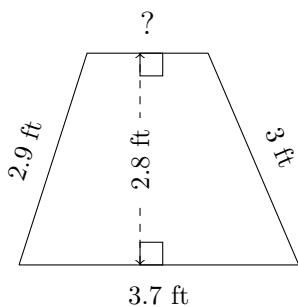


Trapezium Measurements (B)

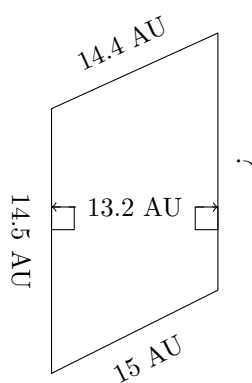
Calculate the missing measurements for each trapezium.

1.



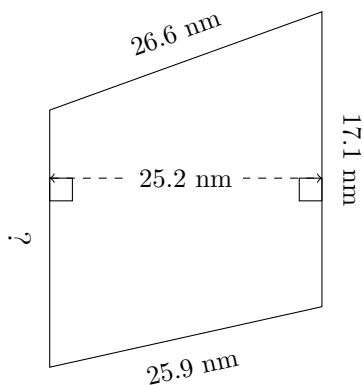
$P = ?$
 $A = 7.42 \text{ ft}^2$

2.



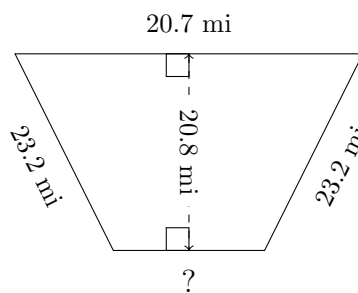
$P = ?$
 $A = 194.04 \text{ AU}^2$

3.



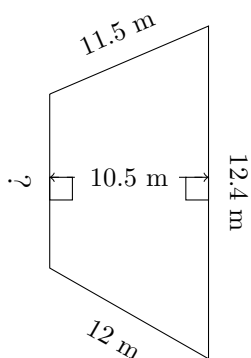
$P = ?$
 $A = 447.3 \text{ nm}^2$

4.



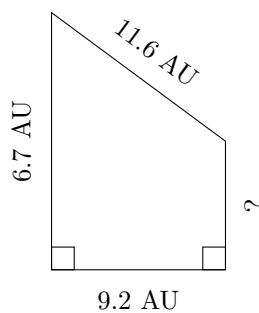
$P = ?$
 $A = 308.88 \text{ mi}^2$

5.



$P = ?$
 $A = 102.375 \text{ m}^2$

6.



$P = ?$
 $A = 46.92 \text{ AU}^2$