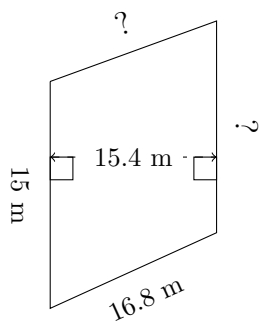


Trapezium Measurements (F)

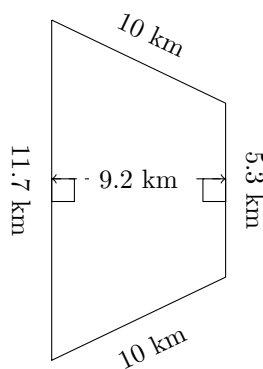
Calculate the missing measurements for each trapezium.

1.



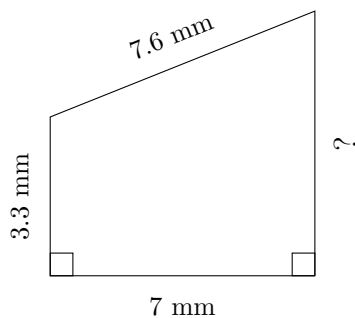
$P = 61.5 \text{ m}$
 $A = 220.22 \text{ m}^2$

2.



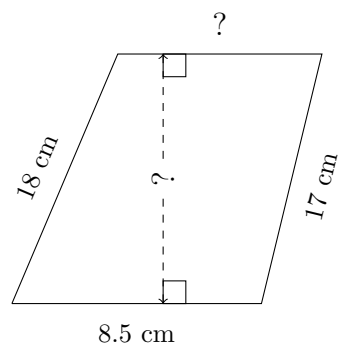
$P = ?$
 $A = ?$

3.



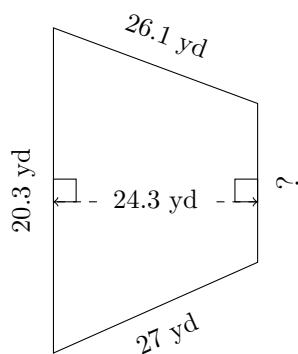
$P = ?$
 $A = 31.85 \text{ mm}^2$

4.



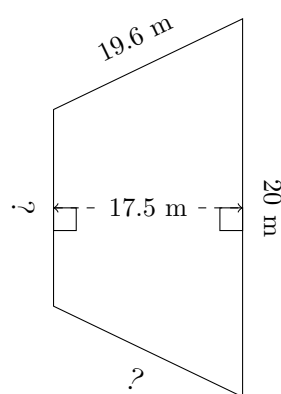
$P = 48.6 \text{ cm}$
 $A = 112.2 \text{ cm}^2$

5.



$P = 85.9 \text{ yd}$
 $A = ?$

6.



$P = 69.6 \text{ m}$
 $A = 266 \text{ m}^2$