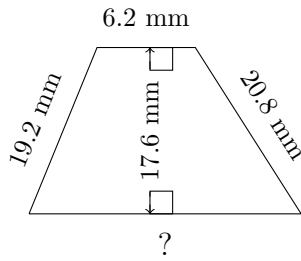


# Trapezoid Measurements (A)

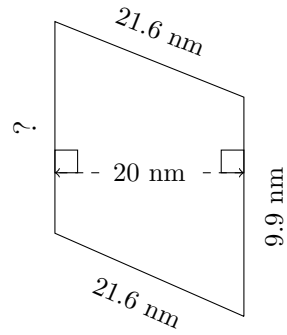
Calculate the missing measurements for each trapezoid.

1.



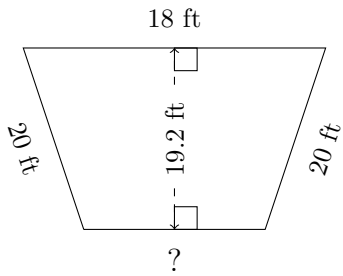
$P = 63.8 \text{ mm}$   
 $A = ?$

2.



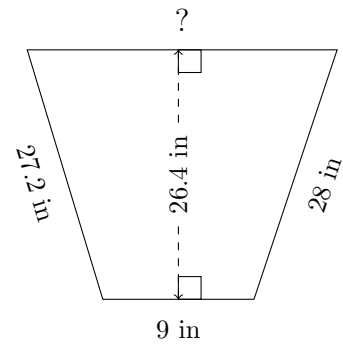
$P = 61.5 \text{ mm}$   
 $A = ?$

3.



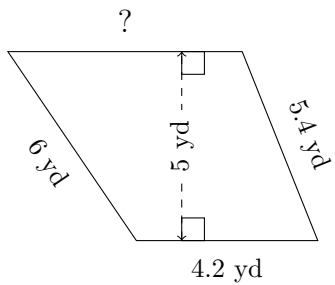
$P = 68.8 \text{ ft}$   
 $A = ?$

4.



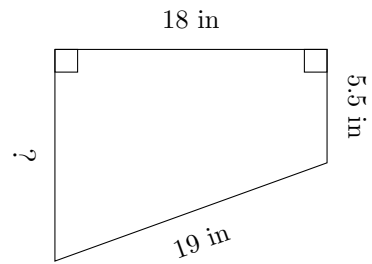
$P = 82.3 \text{ in}$   
 $A = ?$

5.



$P = 21 \text{ yd}$   
 $A = ?$

6.



$P = 52.5 \text{ in}$   
 $A = ?$