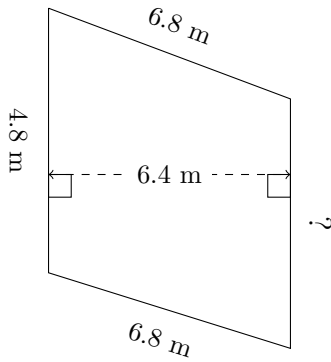


Trapezoid Measurements (I)

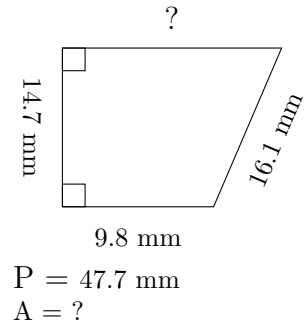
Calculate the missing measurements for each trapezoid.

1.

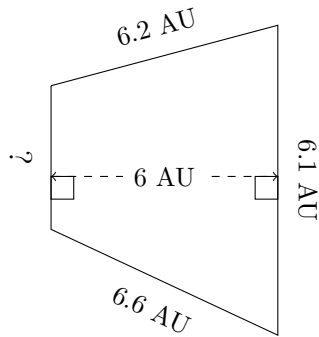


$P = 22.7 \text{ m}$
 $A = ?$

2.

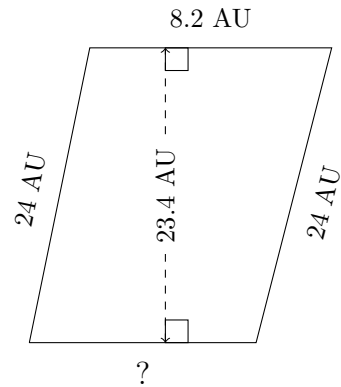


3.



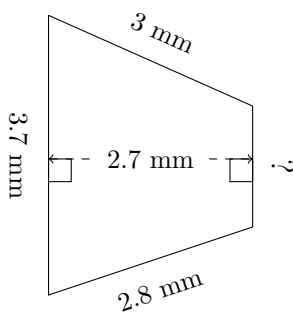
$P = 21.5 \text{ AU}$
 $A = ?$

4.



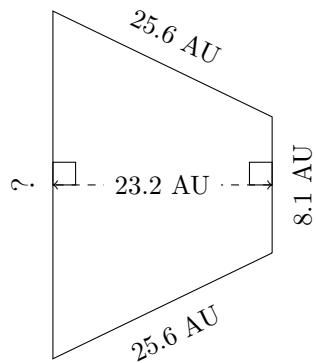
$P = 65.2 \text{ AU}$
 $A = ?$

5.



$P = 11.1 \text{ mm}$
 $A = ?$

6.



$P = 80 \text{ AU}$
 $A = ?$