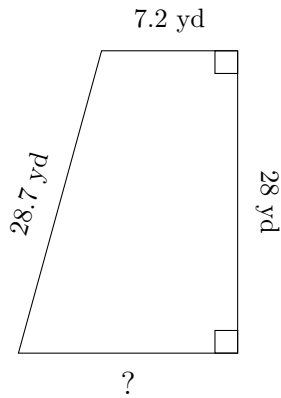


Trapezoid Measurements (I)

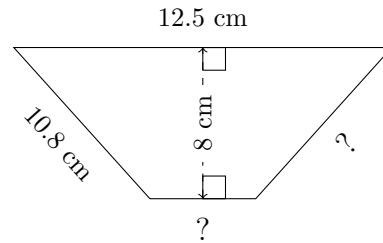
Calculate the missing measurements for each trapezoid.

1.



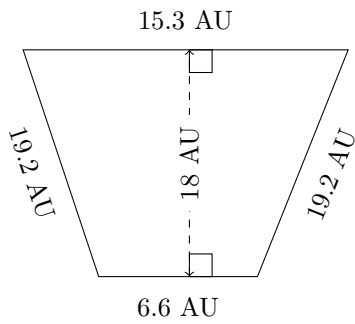
$P = 72.2 \text{ yd}$
 $A = ?$

2.



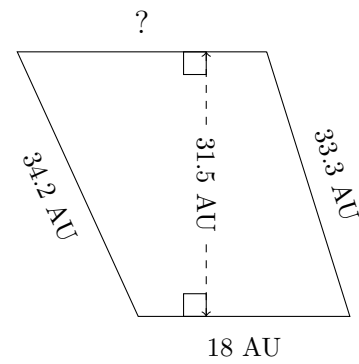
$P = 37.6 \text{ cm}$
 $A = 64 \text{ cm}^2$

3.



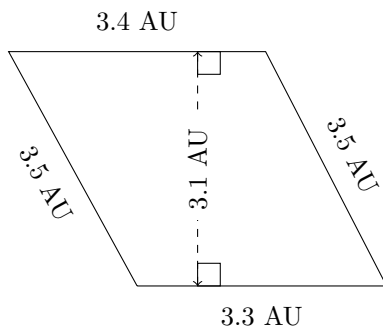
$P = ?$
 $A = ?$

4.



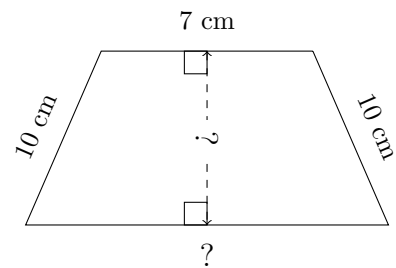
$P = ?$
 $A = 650.475 \text{ AU}^2$

5.



$P = ?$
 $A = ?$

6.



$P = 39 \text{ cm}$
 $A = 87.4 \text{ cm}^2$