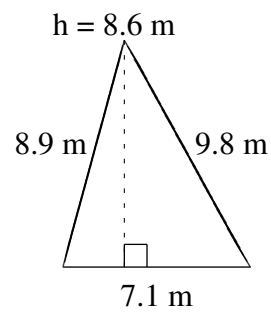
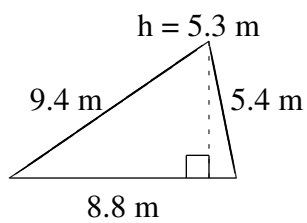
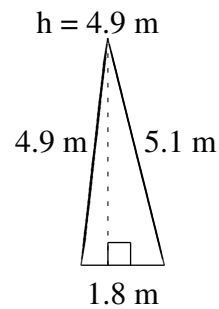
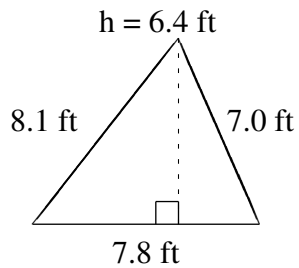
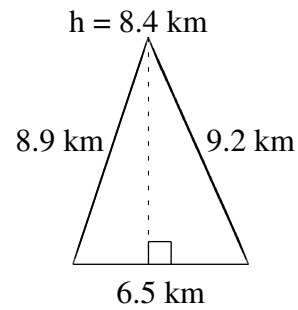
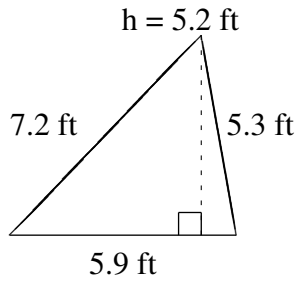


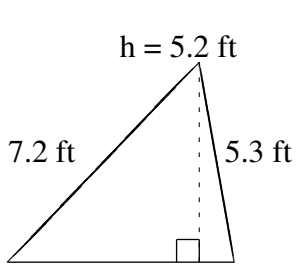
Area and Perimeter of Triangles (F)

Find the area and perimeter of each triangle.



Area and Perimeter of Triangles (F) Answers

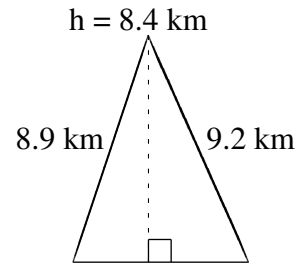
Find the area and perimeter of each triangle.



5.9 ft

$$A = 15.34 \text{ ft}^2$$

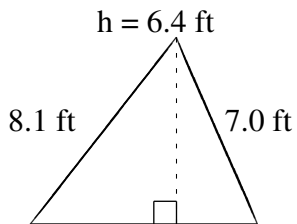
$$P = 18.4 \text{ ft}$$



6.5 km

$$A = 27.30 \text{ km}^2$$

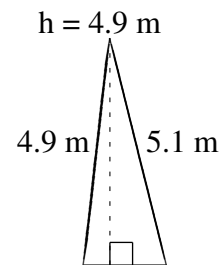
$$P = 24.6 \text{ km}$$



7.8 ft

$$A = 24.96 \text{ ft}^2$$

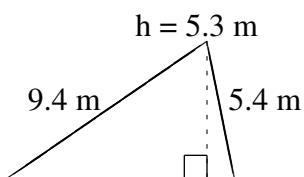
$$P = 22.9 \text{ ft}$$



1.8 m

$$A = 4.41 \text{ m}^2$$

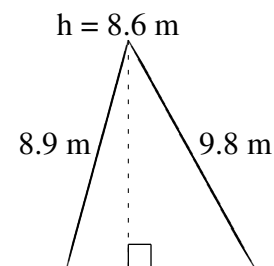
$$P = 11.8 \text{ m}$$



8.8 m

$$A = 23.32 \text{ m}^2$$

$$P = 23.6 \text{ m}$$



7.1 m

$$A = 30.53 \text{ m}^2$$

$$P = 25.8 \text{ m}$$