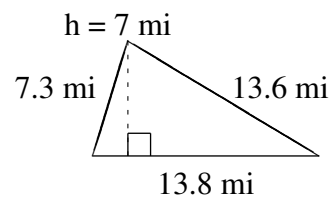
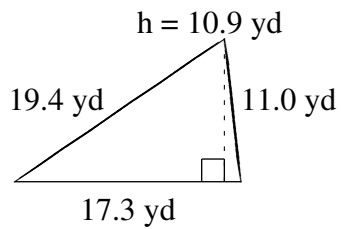
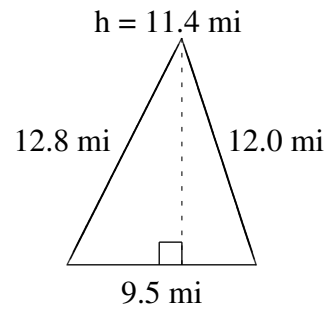
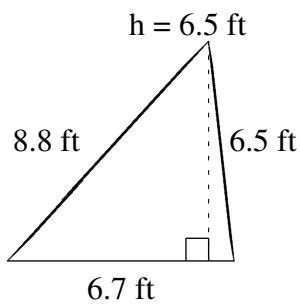
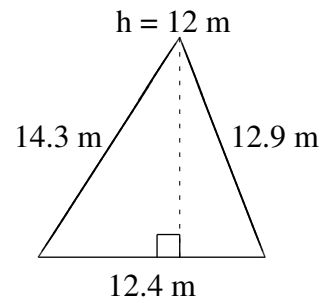
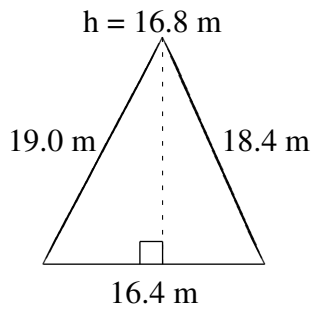


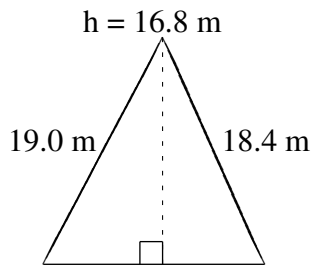
# Area and Perimeter of Triangles (A)

Find the area and perimeter of each triangle.

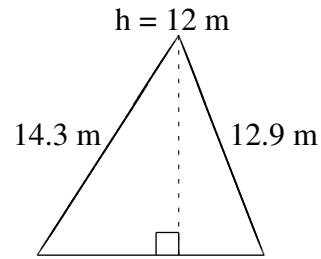


# Area and Perimeter of Triangles (A) Answers

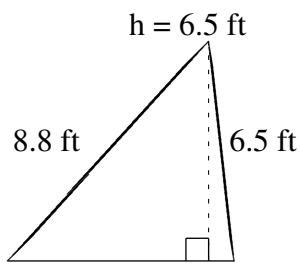
Find the area and perimeter of each triangle.



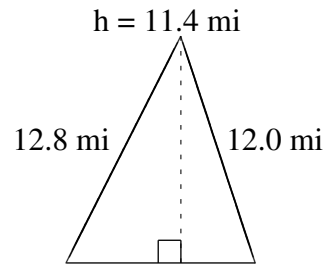
$$A = 137.76 \text{ m}^2$$
$$P = 53.8 \text{ m}$$



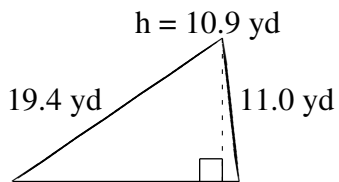
$$A = 74.4 \text{ m}^2$$
$$P = 39.6 \text{ m}$$



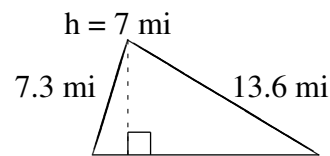
$$A = 21.775 \text{ ft}^2$$
$$P = 22.0 \text{ ft}$$



$$A = 54.15 \text{ mi}^2$$
$$P = 34.3 \text{ mi}$$



$$A = 94.285 \text{ yd}^2$$
$$P = 47.7 \text{ yd}$$



$$A = 48.3 \text{ mi}^2$$
$$P = 34.7 \text{ mi}$$