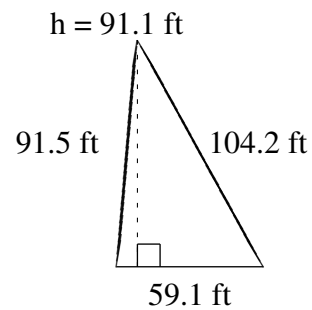
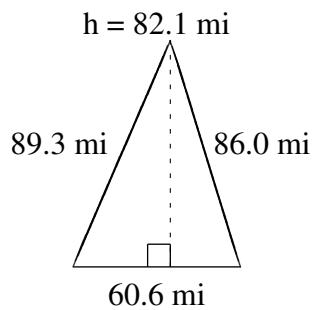
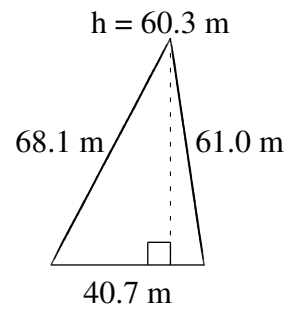
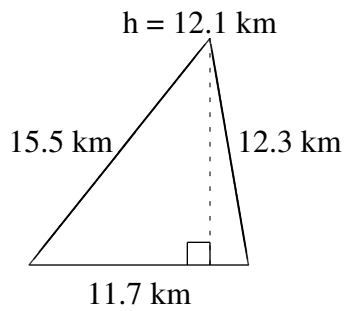
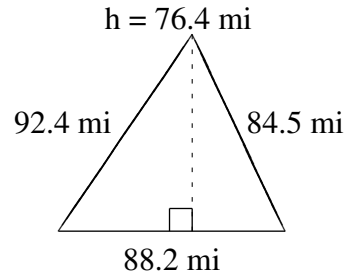
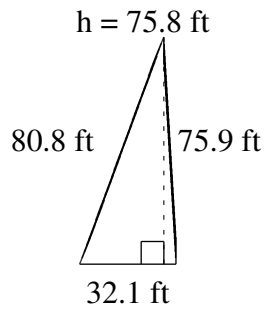


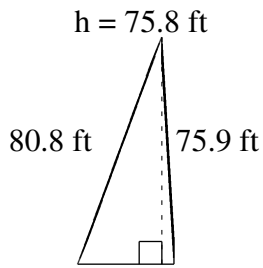
Area and Perimeter of Triangles (G)

Find the area and perimeter of each triangle.

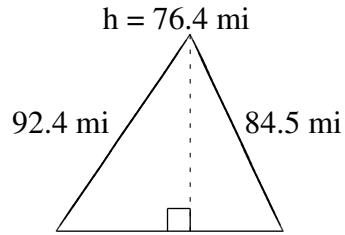


Area and Perimeter of Triangles (G) Answers

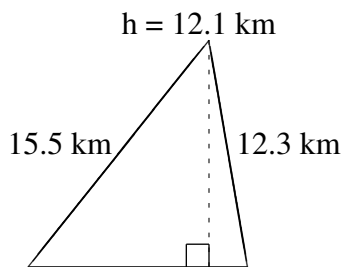
Find the area and perimeter of each triangle.



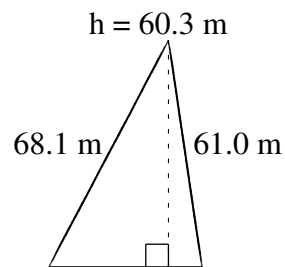
$$A = 1216.59 \text{ ft}^2$$
$$P = 188.8 \text{ ft}$$



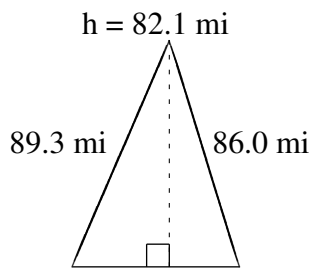
$$A = 3369.24 \text{ mi}^2$$
$$P = 265.1 \text{ mi}$$



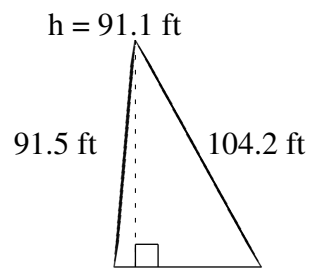
$$A = 70.785 \text{ km}^2$$
$$P = 39.5 \text{ km}$$



$$A = 1227.105 \text{ m}^2$$
$$P = 169.8 \text{ m}$$



$$A = 2487.63 \text{ mi}^2$$
$$P = 235.9 \text{ mi}$$



$$A = 2692.005 \text{ ft}^2$$
$$P = 254.8 \text{ ft}$$