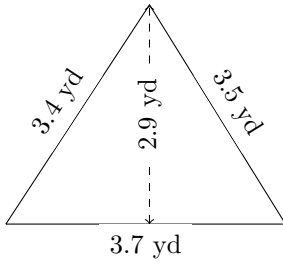


# Perimeter and Area of Triangles (B)

Calculate the perimeter and area for each triangle.

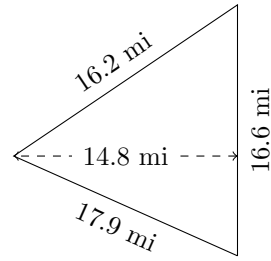
1.



$P = ? \text{ yd}$

$A = ? \text{ yd}^2$

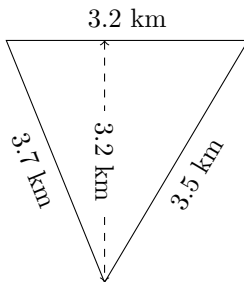
2.



$P = ? \text{ mi}$

$A = ? \text{ mi}^2$

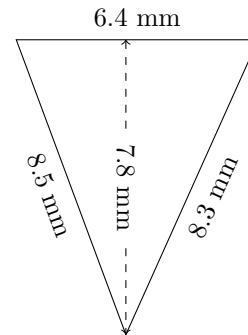
3.



$P = ? \text{ km}$

$A = ? \text{ km}^2$

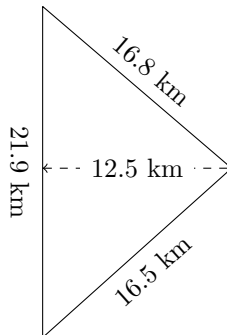
4.



$P = ? \text{ mm}$

$A = ? \text{ mm}^2$

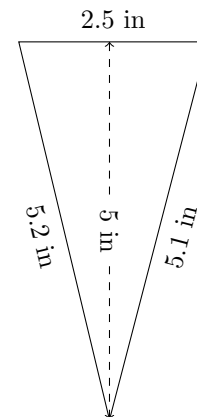
5.



$P = ? \text{ km}$

$A = ? \text{ km}^2$

6.



$P = ? \text{ in}$

$A = ? \text{ in}^2$