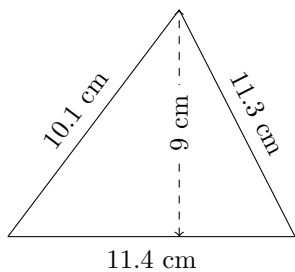


Perimeter and Area of Triangles (A)

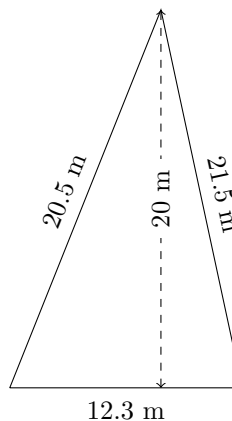
Calculate the perimeter and area for each triangle.

1.



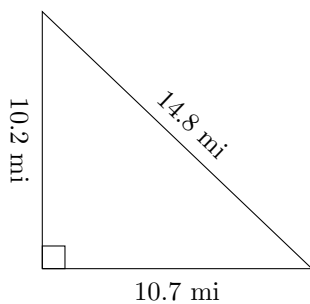
$$P = ? \text{ cm}$$
$$A = ? \text{ cm}^2$$

2.



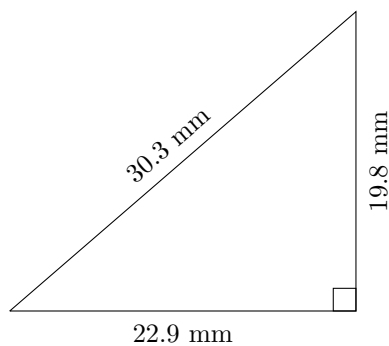
$$P = ? \text{ m}$$
$$A = ? \text{ m}^2$$

3.



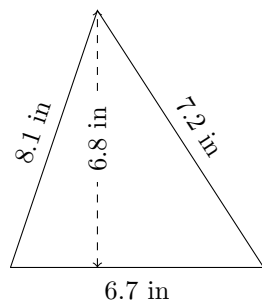
$$P = ? \text{ mi}$$
$$A = ? \text{ mi}^2$$

4.



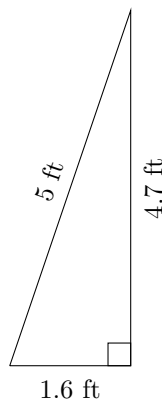
$$P = ? \text{ mm}$$
$$A = ? \text{ mm}^2$$

5.



$$P = ? \text{ in}$$
$$A = ? \text{ in}^2$$

6.



$$P = ? \text{ ft}$$
$$A = ? \text{ ft}^2$$