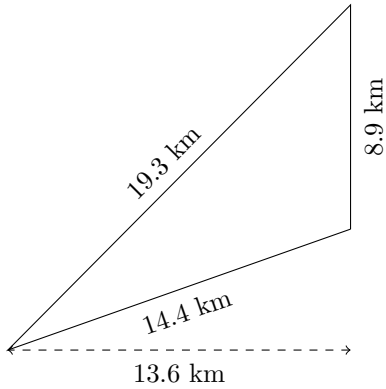


Perimeter and Area of Triangles (D)

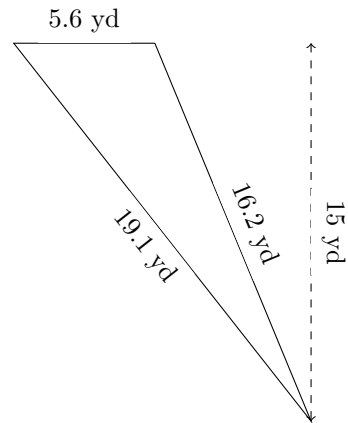
Calculate the perimeter and area for each triangle.

1.



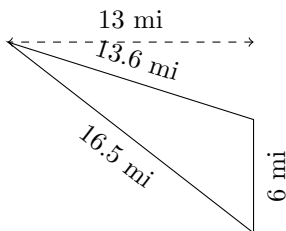
P = ? km
A = ? km²

2.



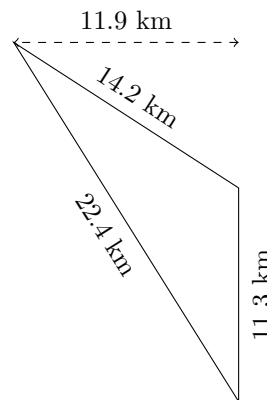
P = ? yd
A = ? yd²

3.



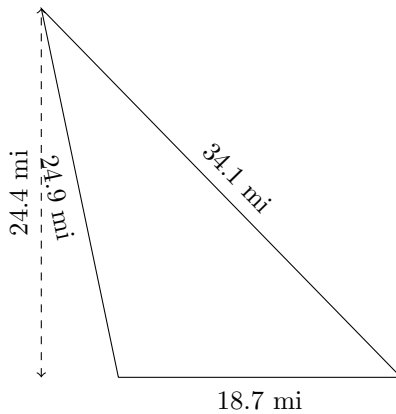
P = ? mi
A = ? mi²

4.



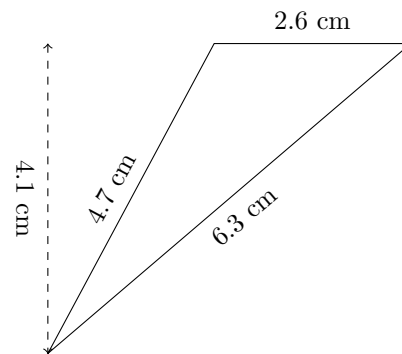
P = ? km
A = ? km²

5.



P = ? mi
A = ? mi²

6.



P = ? cm
A = ? cm²