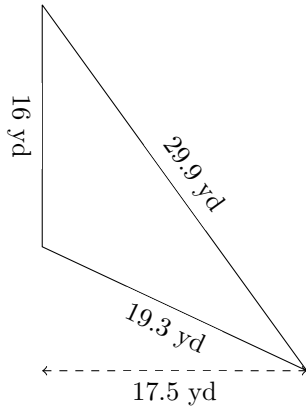


# Perimeter and Area of Triangles (G)

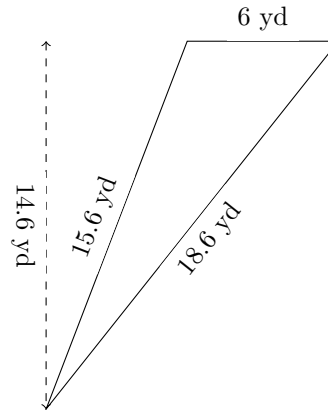
Calculate the perimeter and area for each triangle.

1.



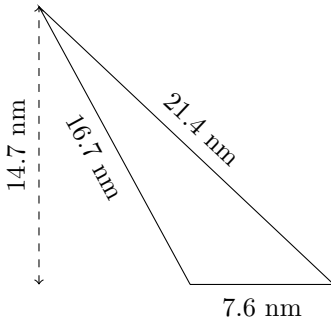
$P = ? \text{ yd}$   
 $A = ? \text{ yd}^2$

2.



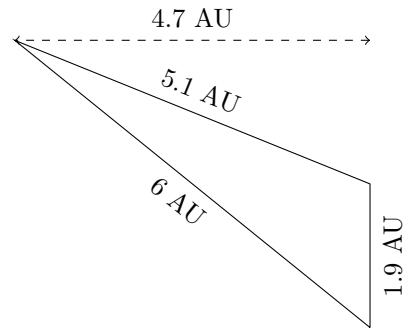
$P = ? \text{ yd}$   
 $A = ? \text{ yd}^2$

3.



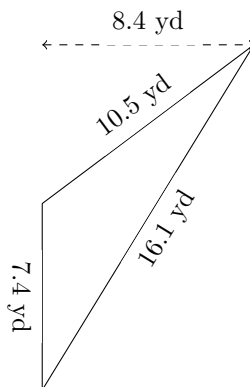
$P = ? \text{ nm}$   
 $A = ? \text{ nm}^2$

4.



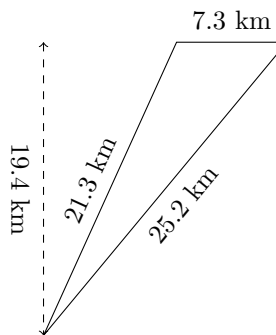
$P = ? \text{ AU}$   
 $A = ? \text{ AU}^2$

5.



$P = ? \text{ yd}$   
 $A = ? \text{ yd}^2$

6.



$P = ? \text{ km}$   
 $A = ? \text{ km}^2$