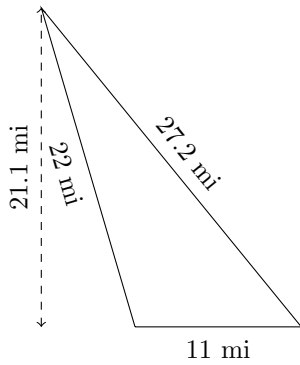


Perimeter and Area of Triangles (E)

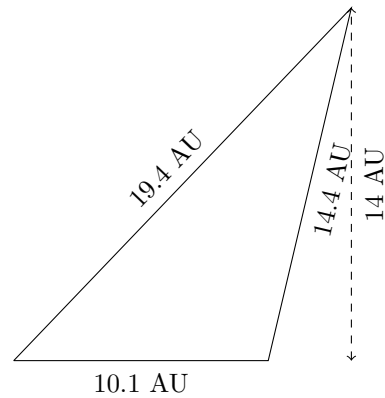
Calculate the perimeter and area for each triangle.

1.



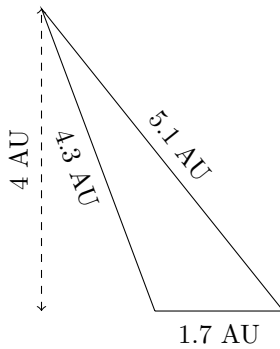
P = ? mi
A = ? mi²

2.



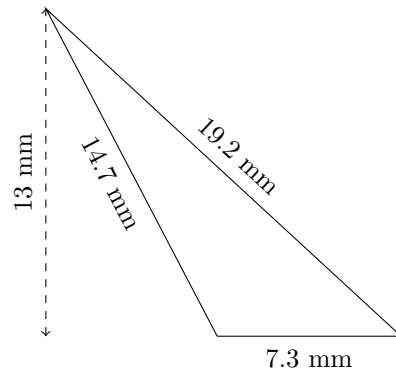
P = ? AU
A = ? AU²

3.



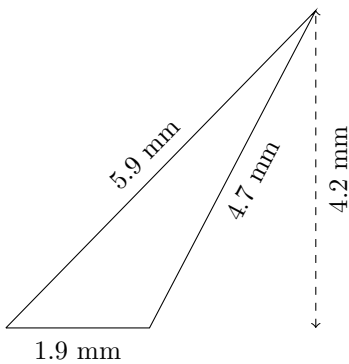
P = ? AU
A = ? AU²

4.



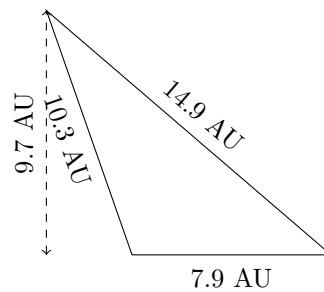
P = ? mm
A = ? mm²

5.



P = ? mm
A = ? mm²

6.



P = ? AU
A = ? AU²