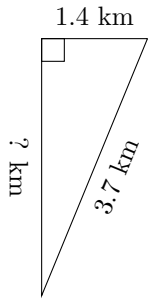


Triangles Measurements (C)

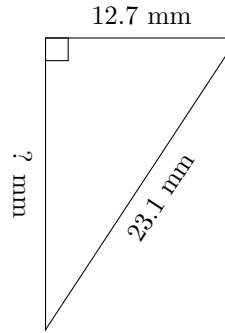
Calculate the missing measurements for each triangle.

1.



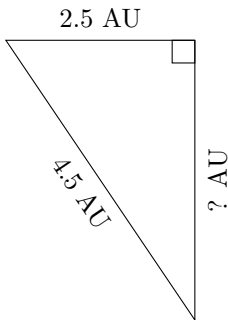
$P = 8.5 \text{ km}$
 $A = ? \text{ km}^2$

2.



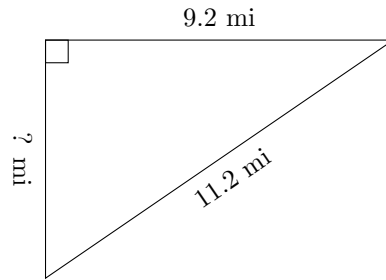
$P = 55.1 \text{ mm}$
 $A = ? \text{ mm}^2$

3.



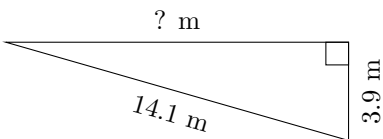
$P = 10.7 \text{ AU}$
 $A = ? \text{ AU}^2$

4.



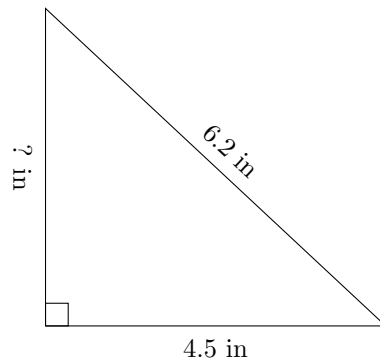
$P = 26.7 \text{ mi}$
 $A = ? \text{ mi}^2$

5.



$P = 31.6 \text{ m}$
 $A = ? \text{ m}^2$

6.



$P = 14.9 \text{ in}$
 $A = ? \text{ in}^2$