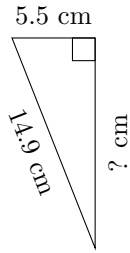


# Triangles Measurements (D)

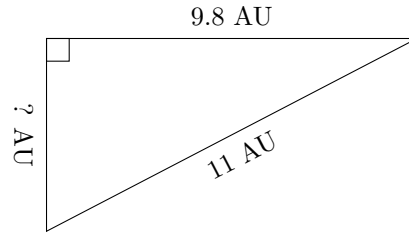
Calculate the missing measurements for each triangle.

1.



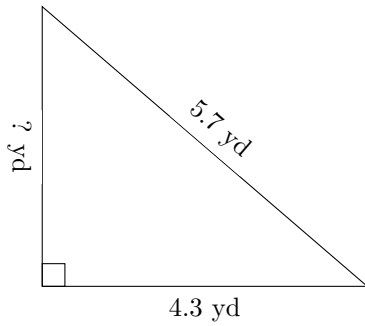
$P = 34.3 \text{ cm}$   
 $A = ? \text{ cm}^2$

2.



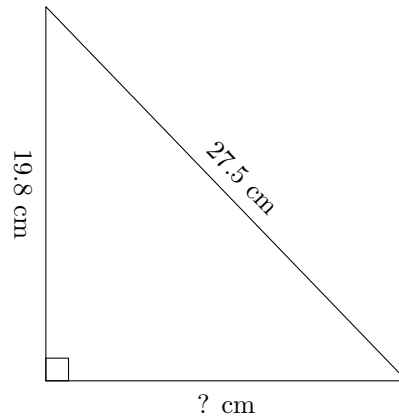
$P = 25.9 \text{ AU}$   
 $A = ? \text{ AU}^2$

3.



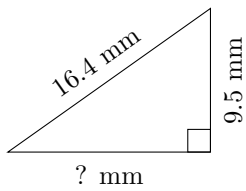
$P = 13.7 \text{ yd}$   
 $A = ? \text{ yd}^2$

4.



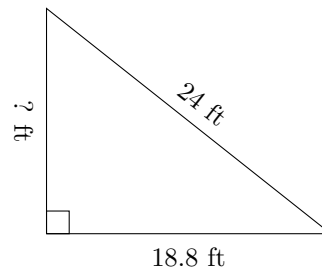
$P = 66.4 \text{ cm}$   
 $A = ? \text{ cm}^2$

5.



$P = 39.3 \text{ mm}$   
 $A = ? \text{ mm}^2$

6.



$P = 57.7 \text{ ft}$   
 $A = ? \text{ ft}^2$