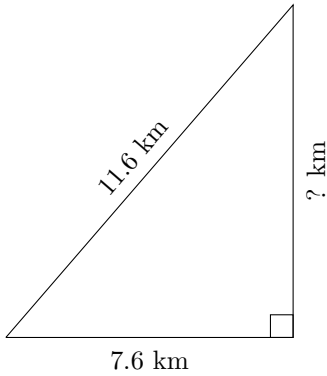


Triangles Measurements (I)

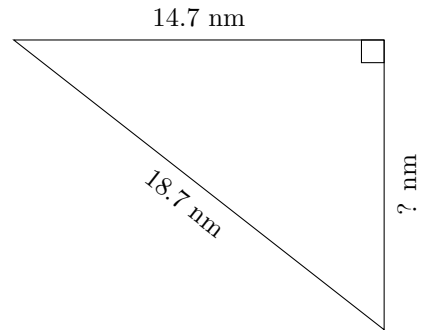
Calculate the missing measurements for each triangle.

1.



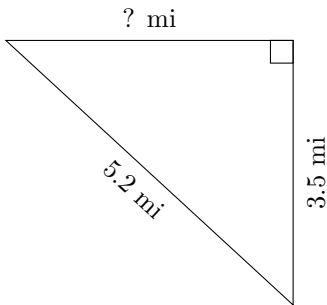
$$P = 28 \text{ km}$$
$$A = ? \text{ km}^2$$

2.



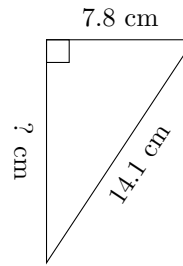
$$P = 44.9 \text{ nm}$$
$$A = ? \text{ nm}^2$$

3.



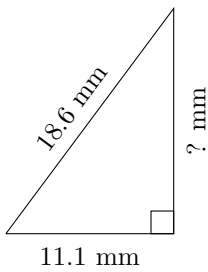
$$P = 12.5 \text{ mi}$$
$$A = ? \text{ mi}^2$$

4.



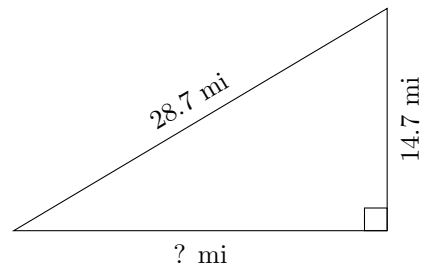
$$P = 33.7 \text{ cm}$$
$$A = ? \text{ cm}^2$$

5.



$$P = 44.6 \text{ mm}$$
$$A = ? \text{ mm}^2$$

6.



$$P = 68.1 \text{ mi}$$
$$A = ? \text{ mi}^2$$