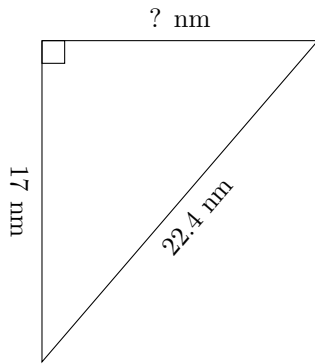


Triangles Measurements (J)

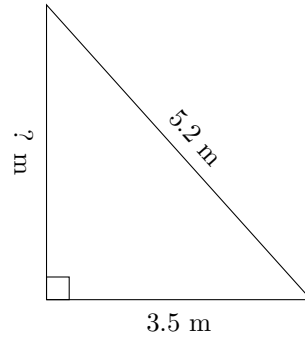
Calculate the missing measurements for each triangle.

1.



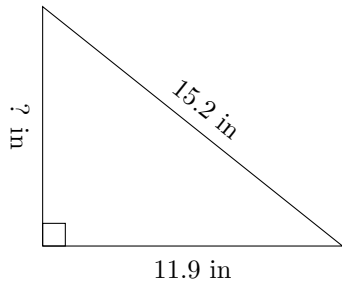
$$P = 54 \text{ nm}$$
$$A = ? \text{ nm}^2$$

2.



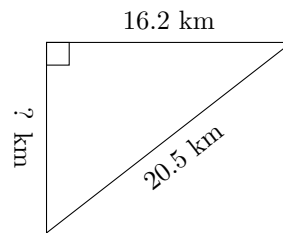
$$P = 12.6 \text{ m}$$
$$A = ? \text{ m}^2$$

3.



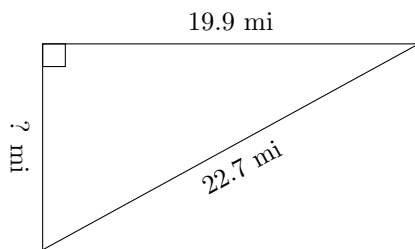
$$P = 36.6 \text{ in}$$
$$A = ? \text{ in}^2$$

4.



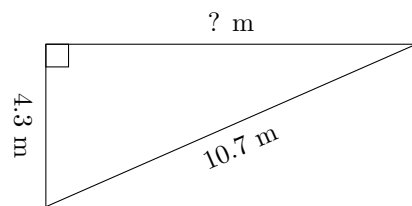
$$P = 49.3 \text{ km}$$
$$A = ? \text{ km}^2$$

5.



$$P = 53.5 \text{ mi}$$
$$A = ? \text{ mi}^2$$

6.



$$P = 24.8 \text{ m}$$
$$A = ? \text{ m}^2$$