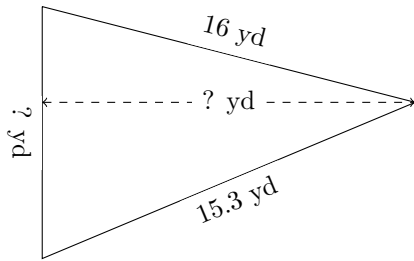


# Triangles Measurements (C)

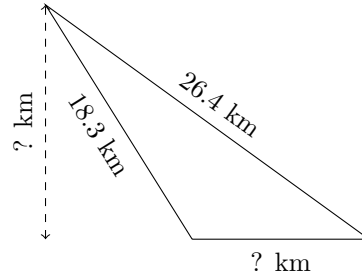
Calculate the missing measurements for each triangle.

1.



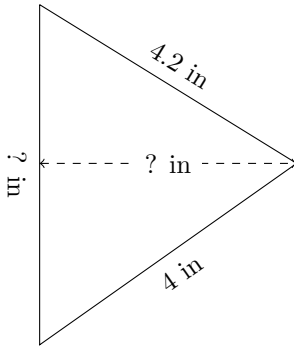
$P = 41.3 \text{ yd}$   
 $A = 74 \text{ yd}^2$

2.



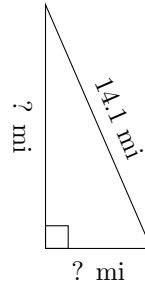
$P = 56.4 \text{ km}$   
 $A = 90.675 \text{ km}^2$

3.



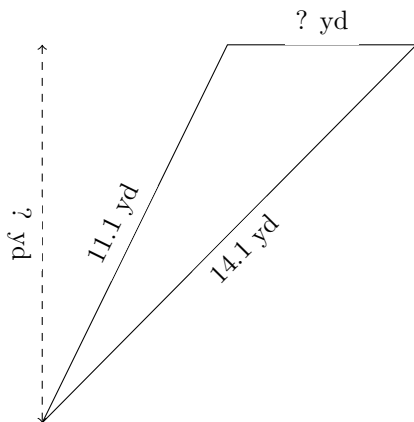
$P = 12.7 \text{ in}$   
 $A = 7.65 \text{ in}^2$

4.



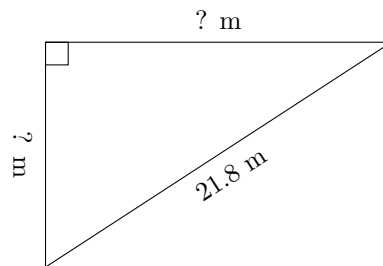
$P = 32.6 \text{ mi}$   
 $A = 36.12 \text{ mi}^2$

5.



$P = 30.2 \text{ yd}$   
 $A = 25 \text{ yd}^2$

6.



$P = 52 \text{ m}$   
 $A = 108.885 \text{ m}^2$