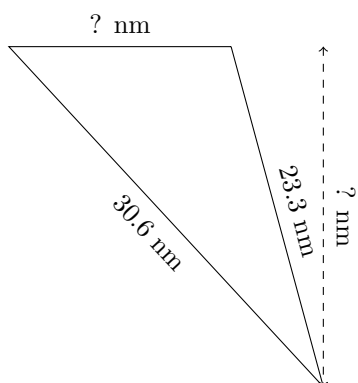


Triangles Measurements (G)

Calculate the missing measurements for each triangle.

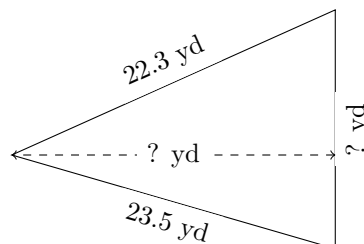
1.



$$P = 68.6 \text{ nm}$$

$$A = 165.375 \text{ nm}^2$$

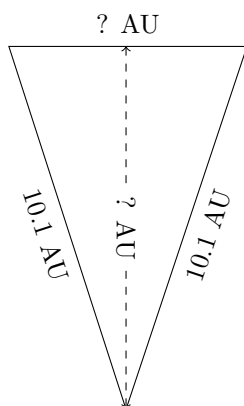
2.



$$P = 61.6 \text{ yd}$$

$$A = 169.06 \text{ yd}^2$$

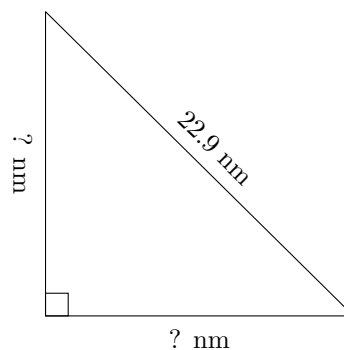
3.



$$P = 26.5 \text{ AU}$$

$$A = 30.24 \text{ AU}^2$$

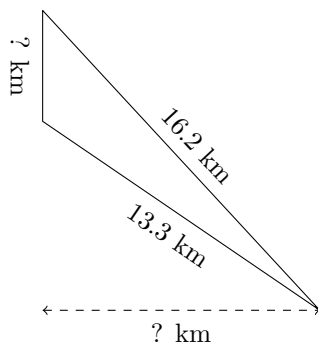
4.



$$P = 55.3 \text{ nm}$$

$$A = 131.215 \text{ nm}^2$$

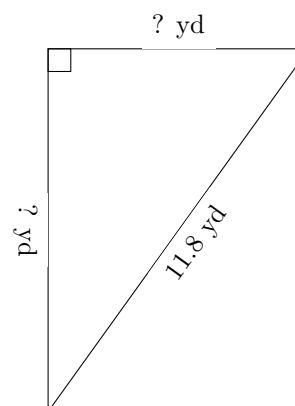
5.



$$P = 33.9 \text{ km}$$

$$A = 24.2 \text{ km}^2$$

6.



$$P = 28.3 \text{ yd}$$

$$A = 33.12 \text{ yd}^2$$