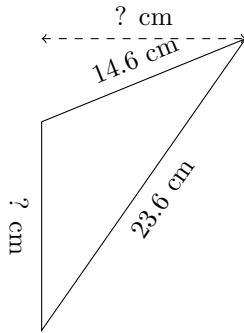


# Triangles Measurements (H)

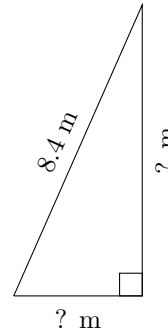
Calculate the missing measurements for each triangle.

1.



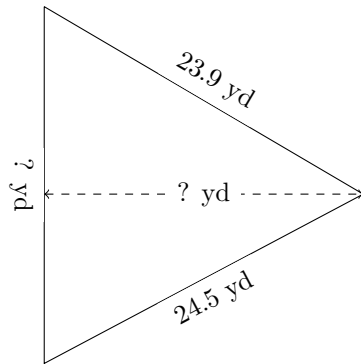
$P = 52 \text{ cm}$   
 $A = 93.15 \text{ cm}^2$

2.



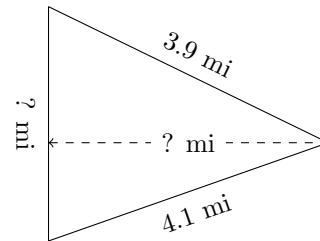
$P = 19.5 \text{ m}$   
 $A = 13.09 \text{ m}^2$

3.



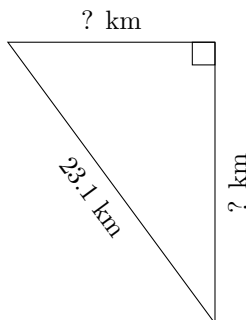
$P = 72 \text{ yd}$   
 $A = 248.98 \text{ yd}^2$

4.



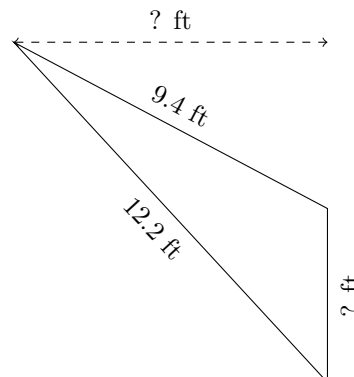
$P = 11.1 \text{ mi}$   
 $A = 5.735 \text{ mi}^2$

5.



$P = 55.4 \text{ km}$   
 $A = 127.41 \text{ km}^2$

6.



$P = 26.2 \text{ ft}$   
 $A = 19.09 \text{ ft}^2$