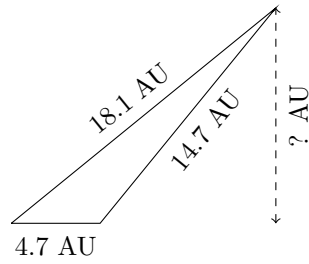


# Triangles Measurements (B)

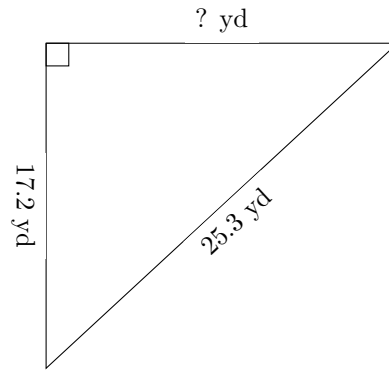
Calculate the missing measurements for each triangle.

1.



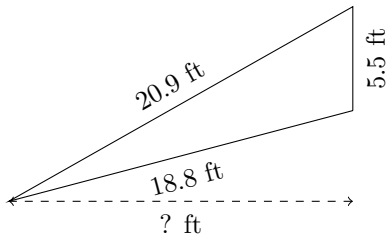
$P = ? \text{ AU}$   
 $A = 26.79 \text{ AU}^2$

2.



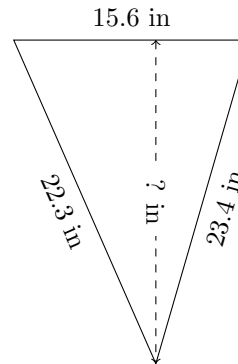
$P = ? \text{ yd}$   
 $A = 159.96 \text{ yd}^2$

3.



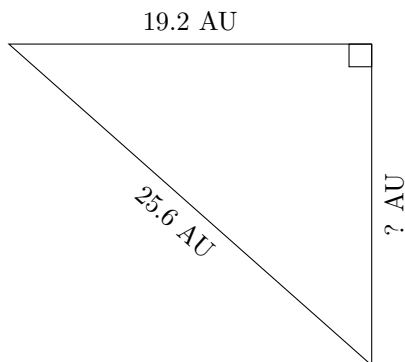
$P = ? \text{ ft}$   
 $A = 50.05 \text{ ft}^2$

4.



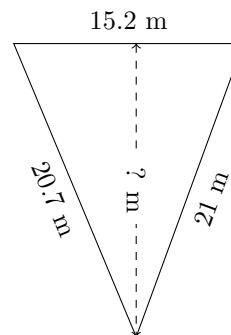
$P = ? \text{ in}$   
 $A = 166.92 \text{ in}^2$

5.



$P = ? \text{ AU}$   
 $A = 163.2 \text{ AU}^2$

6.



$P = ? \text{ m}$   
 $A = 147.44 \text{ m}^2$