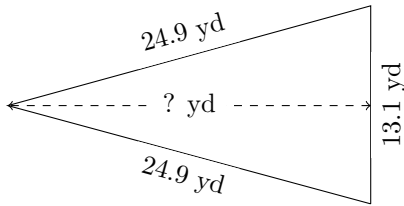


# Triangles Measurements (E)

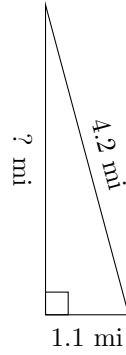
Calculate the missing measurements for each triangle.

1.



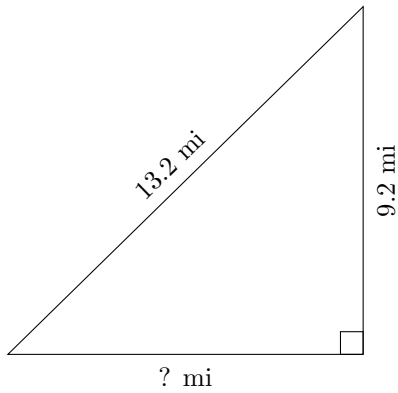
$P = ? \text{ yd}$   
 $A = 157.2 \text{ yd}^2$

2.



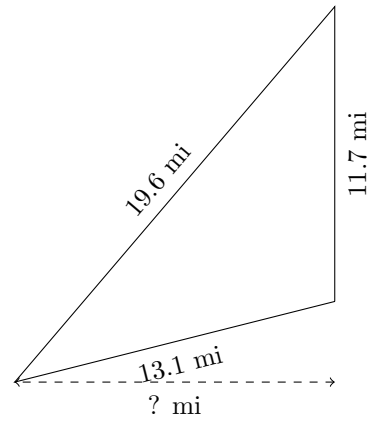
$P = ? \text{ mi}$   
 $A = 2.255 \text{ mi}^2$

3.



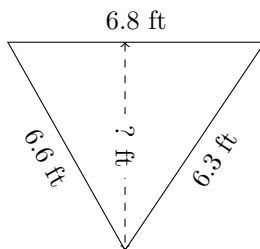
$P = ? \text{ mi}$   
 $A = 43.24 \text{ mi}^2$

4.



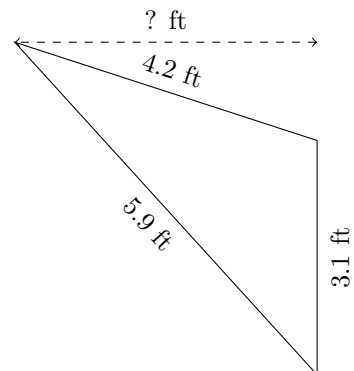
$P = ? \text{ mi}$   
 $A = 74.295 \text{ mi}^2$

5.



$P = ? \text{ ft}$   
 $A = 18.7 \text{ ft}^2$

6.



$P = ? \text{ ft}$   
 $A = 6.2 \text{ ft}^2$