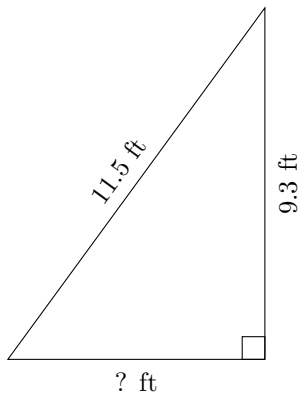


# Triangles Measurements (F)

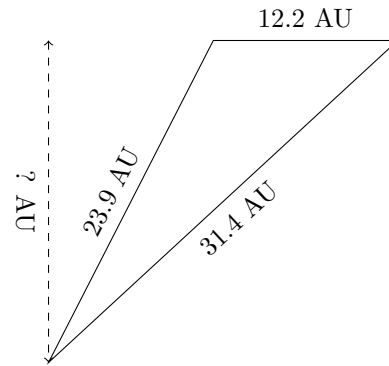
Calculate the missing measurements for each triangle.

1.



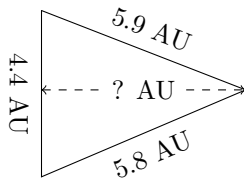
$P = ? \text{ ft}$   
 $A = 31.62 \text{ ft}^2$

2.



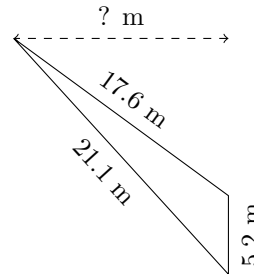
$P = ? \text{ AU}$   
 $A = 129.93 \text{ AU}^2$

3.



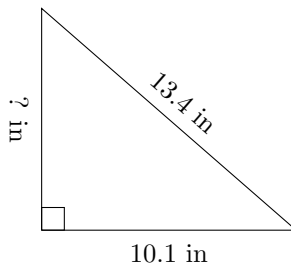
$P = ? \text{ AU}$   
 $A = 11.88 \text{ AU}^2$

4.



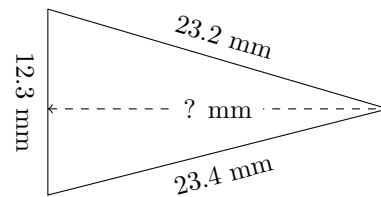
$P = ? \text{ m}$   
 $A = 36.92 \text{ m}^2$

5.



$P = ? \text{ in}$   
 $A = 44.44 \text{ in}^2$

6.



$P = ? \text{ mm}$   
 $A = 138.375 \text{ mm}^2$