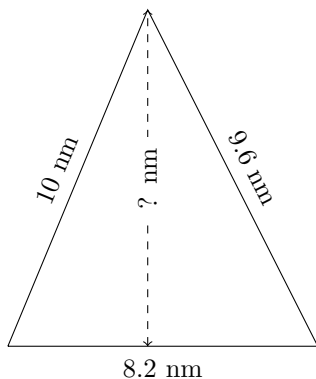


# Triangles Measurements (G)

Calculate the missing measurements for each triangle.

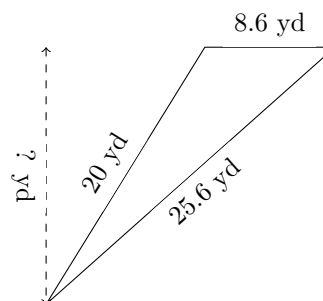
1.



$$P = ? \text{ nm}$$

$$A = 36.49 \text{ nm}^2$$

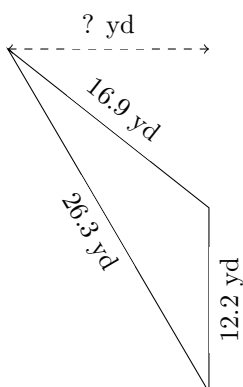
2.



$$P = ? \text{ yd}$$

$$A = 73.1 \text{ yd}^2$$

3.



$$P = ? \text{ yd}$$

$$A = 81.13 \text{ yd}^2$$

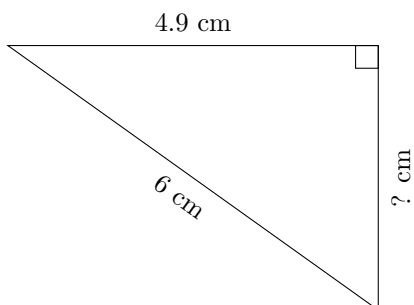
4.



$$P = ? \text{ AU}$$

$$A = 49 \text{ AU}^2$$

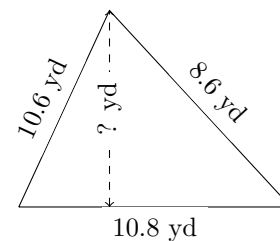
5.



$$P = ? \text{ cm}$$

$$A = 8.575 \text{ cm}^2$$

6.



$$P = ? \text{ yd}$$

$$A = 42.12 \text{ yd}^2$$