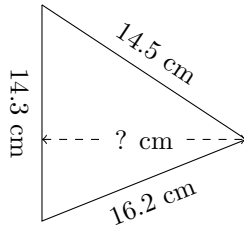


Triangles Measurements (H)

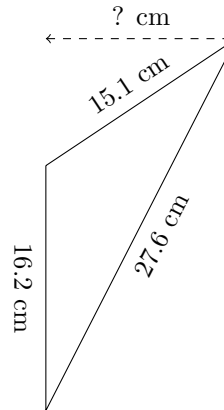
Calculate the missing measurements for each triangle.

1.



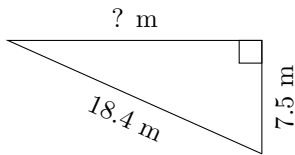
$P = ? \text{ cm}$
 $A = 96.525 \text{ cm}^2$

2.



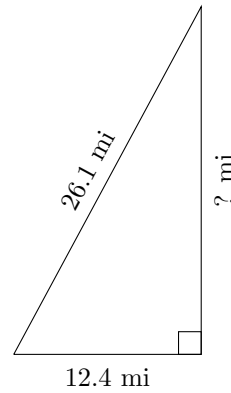
$P = ? \text{ cm}$
 $A = 102.06 \text{ cm}^2$

3.



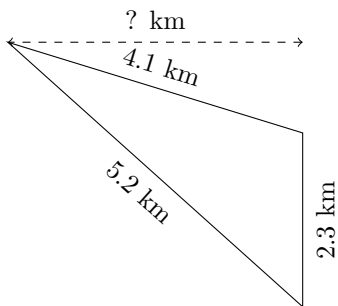
$P = ? \text{ m}$
 $A = 63 \text{ m}^2$

4.



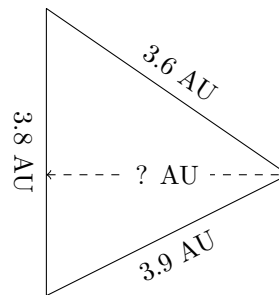
$P = ? \text{ mi}$
 $A = 142.6 \text{ mi}^2$

5.



$P = ? \text{ km}$
 $A = 4.485 \text{ km}^2$

6.



$P = ? \text{ AU}$
 $A = 6.08 \text{ AU}^2$