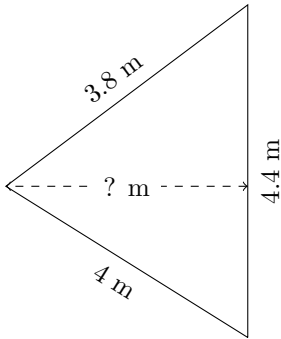


Triangles Measurements (I)

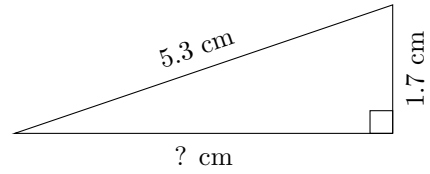
Calculate the missing measurements for each triangle.

1.



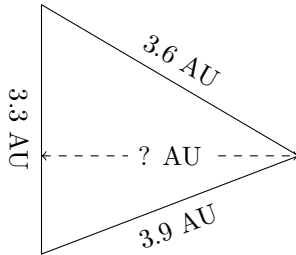
$P = ? \text{ m}$
 $A = 7.04 \text{ m}^2$

2.



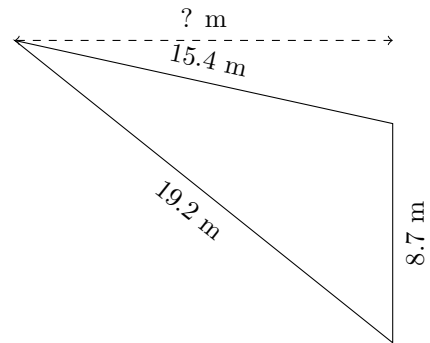
$P = ? \text{ cm}$
 $A = 4.25 \text{ cm}^2$

3.



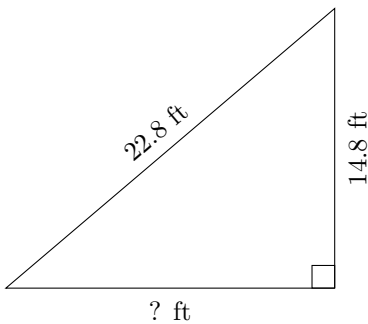
$P = ? \text{ AU}$
 $A = 5.61 \text{ AU}^2$

4.



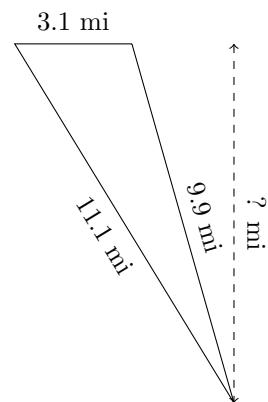
$P = ? \text{ m}$
 $A = 65.25 \text{ m}^2$

5.



$P = ? \text{ ft}$
 $A = 128.76 \text{ ft}^2$

6.



$P = ? \text{ mi}$
 $A = 14.725 \text{ mi}^2$