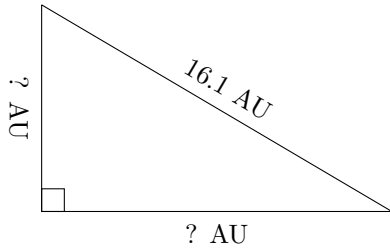


Triangles Measurements (E)

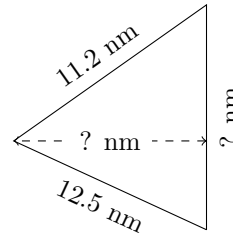
Calculate the missing measurements for each triangle.

1.



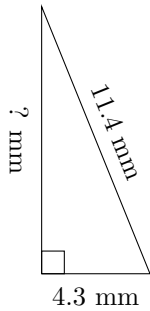
$P = 38.2 \text{ AU}$
 $A = 56.99 \text{ AU}^2$

2.



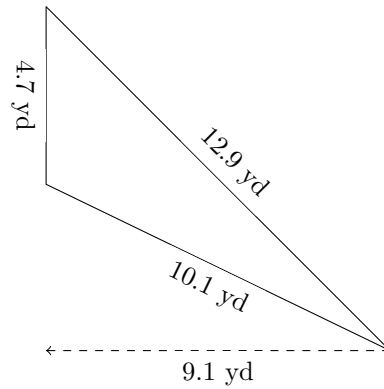
$P = 35.6 \text{ nm}$
 $A = 60.69 \text{ nm}^2$

3.



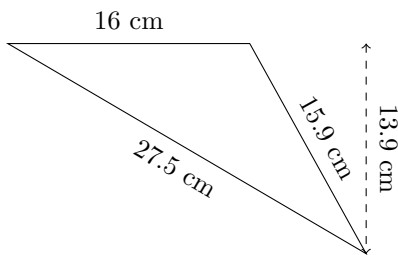
$P = ? \text{ mm}$
 $A = 22.79 \text{ mm}^2$

4.



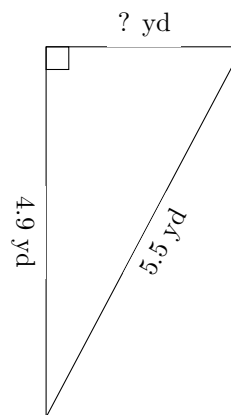
$P = ? \text{ yd}$
 $A = ? \text{ yd}^2$

5.



$P = ? \text{ cm}$
 $A = ? \text{ cm}^2$

6.



$P = 13 \text{ yd}$
 $A = ? \text{ yd}^2$