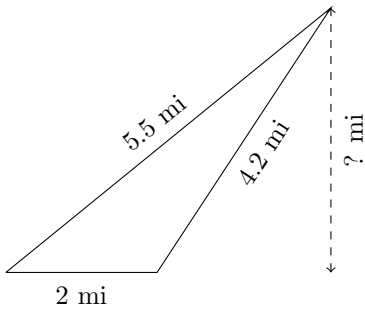


Triangles Measurements (G)

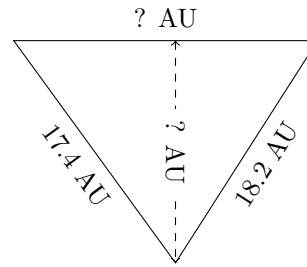
Calculate the missing measurements for each triangle.

1.



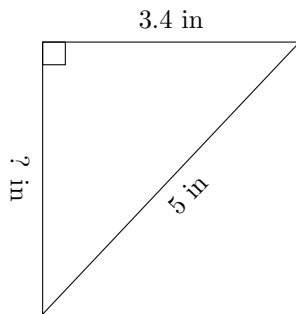
$P = ? \text{ mi}$
 $A = 3.5 \text{ mi}^2$

2.



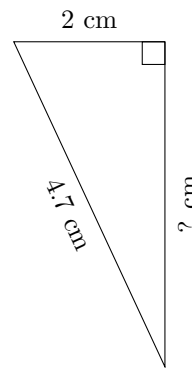
$P = 55.7 \text{ AU}$
 $A = 147.735 \text{ AU}^2$

3.



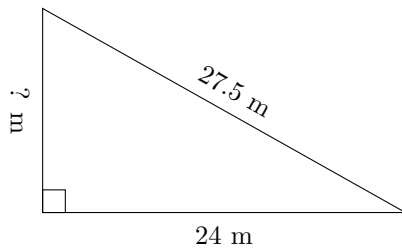
$P = ? \text{ in}$
 $A = 6.12 \text{ in}^2$

4.



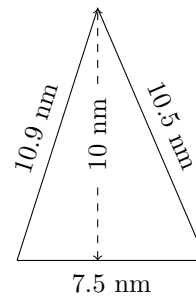
$P = 11 \text{ cm}$
 $A = ? \text{ cm}^2$

5.



$P = 65 \text{ m}$
 $A = ? \text{ m}^2$

6.



$P = ? \text{ nm}$
 $A = ? \text{ nm}^2$