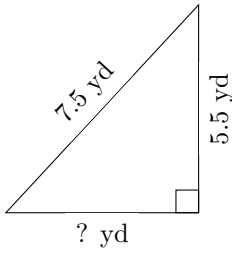


Triangles Measurements (J)

Calculate the missing measurements for each triangle.

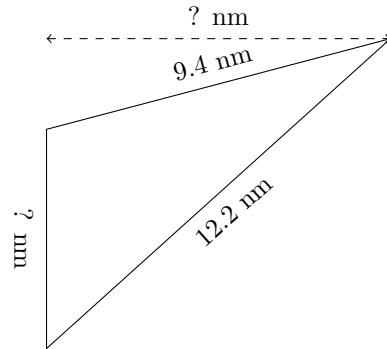
1.



$P = ? \text{ yd}$

$A = 14.025 \text{ yd}^2$

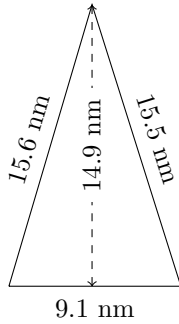
2.



$P = 27.4 \text{ nm}$

$A = 26.39 \text{ nm}^2$

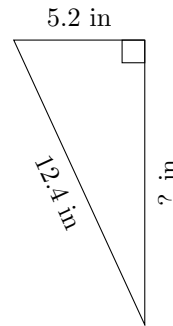
3.



$P = ? \text{ nm}$

$A = ? \text{ nm}^2$

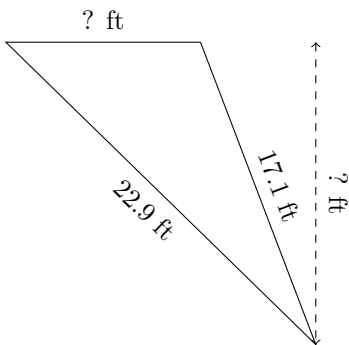
4.



$P = 28.9 \text{ in}$

$A = ? \text{ in}^2$

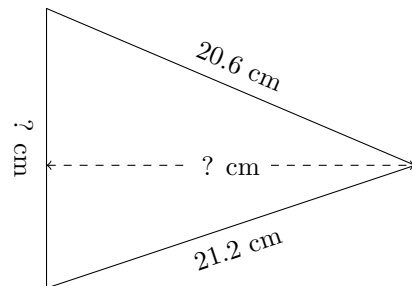
5.



$P = 50.3 \text{ ft}$

$A = 82.4 \text{ ft}^2$

6.



$P = 56.6 \text{ cm}$

$A = 144.3 \text{ cm}^2$