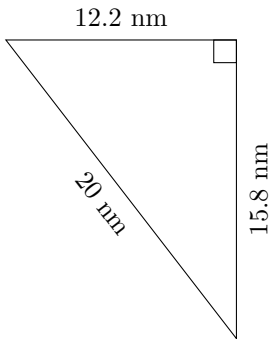


Triangles Measurements (F)

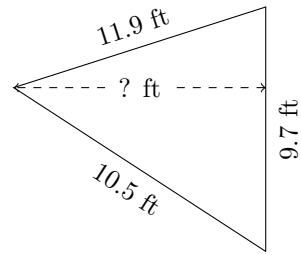
Calculate the area of each triangle using Heron's formula.

1.



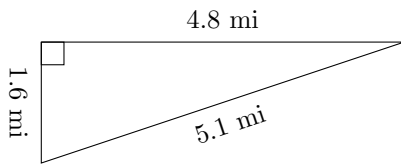
P = ? nm
A = ? nm²

2.



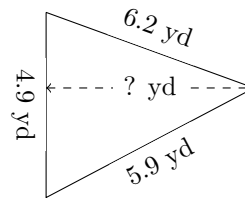
P = ? ft
A = ? ft²

3.



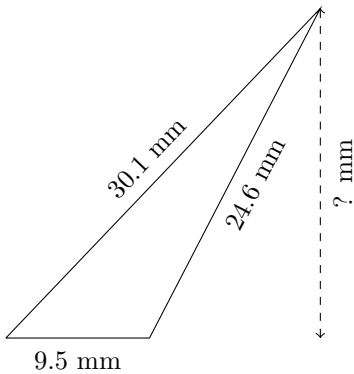
P = ? mi
A = ? mi²

4.



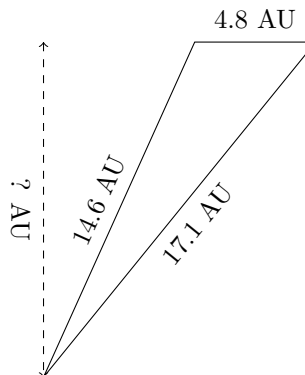
P = ? yd
A = ? yd²

5.



P = ? mm
A = ? mm²

6.



P = ? AU
A = ? AU²