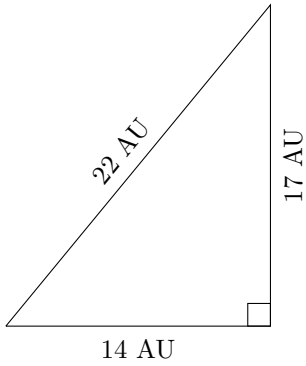


Triangles Measurements (G)

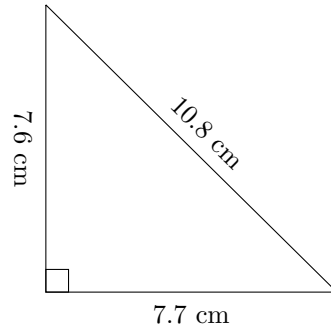
Calculate the area of each triangle using Heron's formula.

1.



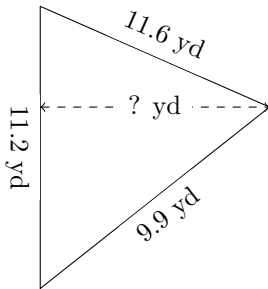
P = ? AU
A = ? AU²

2.



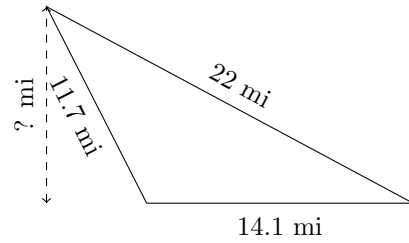
P = ? cm
A = ? cm²

3.



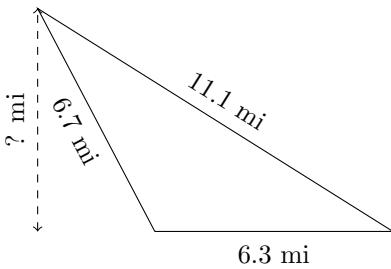
P = ? yd
A = ? yd²

4.



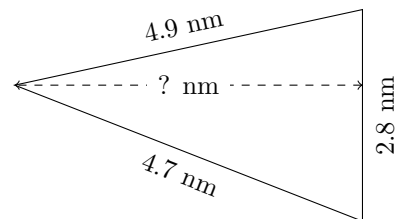
P = ? mi
A = ? mi²

5.



P = ? mi
A = ? mi²

6.



P = ? nm
A = ? nm²