

Triangular Prisms (A)

Name: _____

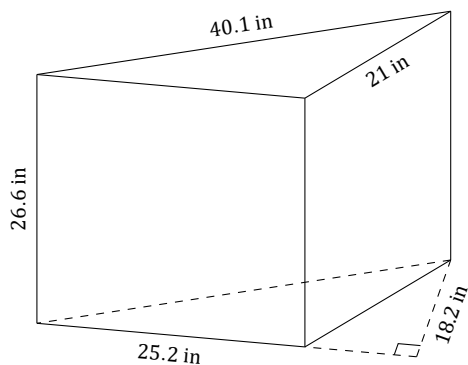
Date: _____

Calculate the volume and surface area of each triangular prism.

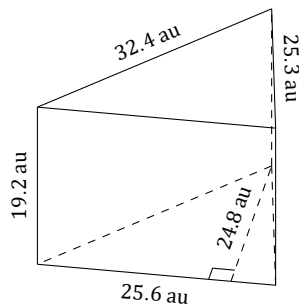
Volume is equal to the Area of the Base \times the Prism Length = $0.5 \times b \times h \times l$

Surface Area is equal to the Perimeter of the Base \times the Prism Length + Twice the Area of the Base = $(P \times l) + (b \times h)$

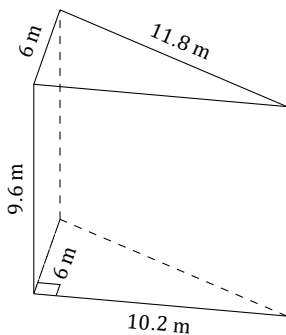
1.



2.



3.



4.

