

Converting Between mm^2 and cm^2 (A)

Name: _____

Date: _____

Score: _____ /10

Complete each conversion. Symbols for copying and pasting: $\times \div ^2 ^3$.



1. Convert 67 mm^2 to cm^2
2. Convert 0.0077 cm^2 to mm^2
3. Convert $289,700 \text{ mm}^2$ to cm^2
4. Convert 0.027 cm^2 to mm^2
5. Convert $77,770,000 \text{ mm}^2$ to cm^2
6. Convert 62.5 cm^2 to mm^2
7. Convert $1,870,000 \text{ mm}^2$ to cm^2
8. Convert $260,000 \text{ mm}^2$ to cm^2
9. Convert 0.0992 cm^2 to mm^2
10. Convert 17.32 cm^2 to mm^2

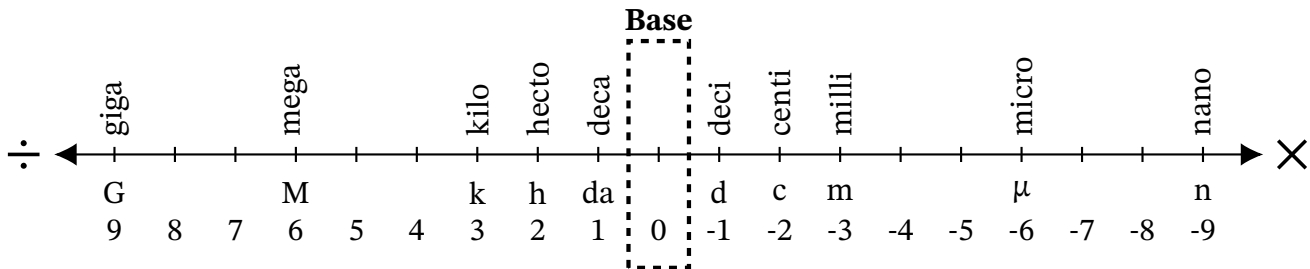
Converting Between mm² and cm² (A) Answers

Name: _____

Date: _____

Score: _____ /10

Complete each conversion. Symbols for copying and pasting: $\times \div ^2 ^3$.



1. Convert 67 mm² to cm²

$$67 \text{ mm}^2 \div 100 = 0.67 \text{ cm}^2$$

2. Convert 0.0077 cm² to mm²

$$0.0077 \text{ cm}^2 \times 100 = 0.77 \text{ mm}^2$$

3. Convert 289,700 mm² to cm²

$$289,700 \text{ mm}^2 \div 100 = 2897 \text{ cm}^2$$

4. Convert 0.027 cm² to mm²

$$0.027 \text{ cm}^2 \times 100 = 2.7 \text{ mm}^2$$

5. Convert 77,770,000 mm² to cm²

$$77,770,000 \text{ mm}^2 \div 100 = 777,700 \text{ cm}^2$$

6. Convert 62.5 cm² to mm²

$$62.5 \text{ cm}^2 \times 100 = 6250 \text{ mm}^2$$

7. Convert 1,870,000 mm² to cm²

$$1,870,000 \text{ mm}^2 \div 100 = 18,700 \text{ cm}^2$$

8. Convert 260,000 mm² to cm²

$$260,000 \text{ mm}^2 \div 100 = 2600 \text{ cm}^2$$

9. Convert 0.0992 cm² to mm²

$$0.0992 \text{ cm}^2 \times 100 = 9.92 \text{ mm}^2$$

10. Convert 17.32 cm² to mm²

$$17.32 \text{ cm}^2 \times 100 = 1732 \text{ mm}^2$$

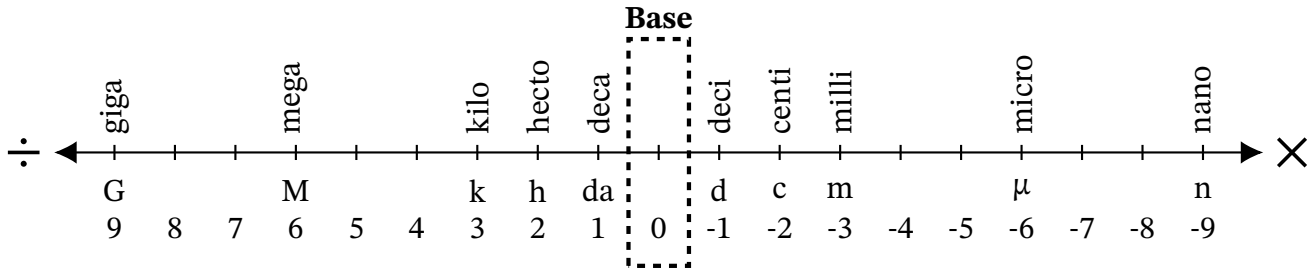
Converting Between mm^2 and cm^2 (B)

Name: _____

Date: _____

Score: _____ /10

Complete each conversion. Symbols for copying and pasting: $\times \div ^2 ^3$.



1. Convert 93 mm^2 to cm^2
2. Convert 773 mm^2 to cm^2
3. Convert 64 mm^2 to cm^2
4. Convert 0.2366 cm^2 to mm^2
5. Convert 209.8 cm^2 to mm^2
6. Convert 5281 cm^2 to mm^2
7. Convert 0.0754 cm^2 to mm^2
8. Convert 4100 mm^2 to cm^2
9. Convert 238 cm^2 to mm^2
10. Convert 59 mm^2 to cm^2

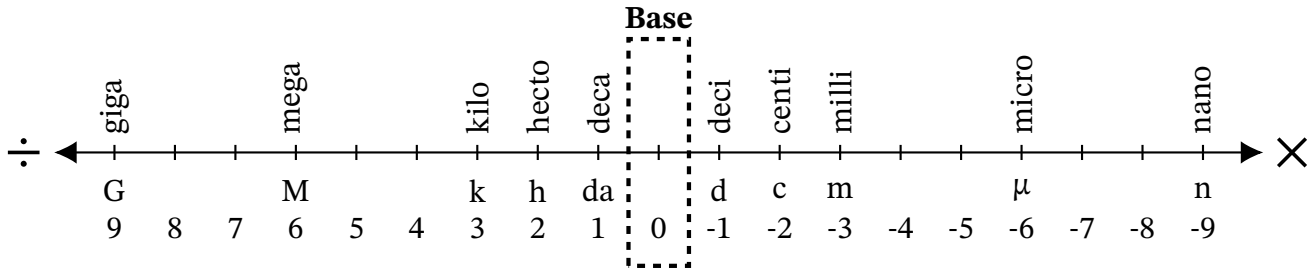
Converting Between mm² and cm² (B) Answers

Name: _____

Date: _____

Score: _____ /10

Complete each conversion. Symbols for copying and pasting: $\times \div ^2 ^3$.



1. Convert 93 mm² to cm²
 $93 \text{ mm}^2 \div 100 = 0.93 \text{ cm}^2$
2. Convert 773 mm² to cm²
 $773 \text{ mm}^2 \div 100 = 7.73 \text{ cm}^2$
3. Convert 64 mm² to cm²
 $64 \text{ mm}^2 \div 100 = 0.64 \text{ cm}^2$
4. Convert 0.2366 cm² to mm²
 $0.2366 \text{ cm}^2 \times 100 = 23.66 \text{ mm}^2$
5. Convert 209.8 cm² to mm²
 $209.8 \text{ cm}^2 \times 100 = 20,980 \text{ mm}^2$
6. Convert 5281 cm² to mm²
 $5281 \text{ cm}^2 \times 100 = 528,100 \text{ mm}^2$
7. Convert 0.0754 cm² to mm²
 $0.0754 \text{ cm}^2 \times 100 = 7.54 \text{ mm}^2$
8. Convert 4100 mm² to cm²
 $4100 \text{ mm}^2 \div 100 = 41 \text{ cm}^2$
9. Convert 238 cm² to mm²
 $238 \text{ cm}^2 \times 100 = 23,800 \text{ mm}^2$
10. Convert 59 mm² to cm²
 $59 \text{ mm}^2 \div 100 = 0.59 \text{ cm}^2$

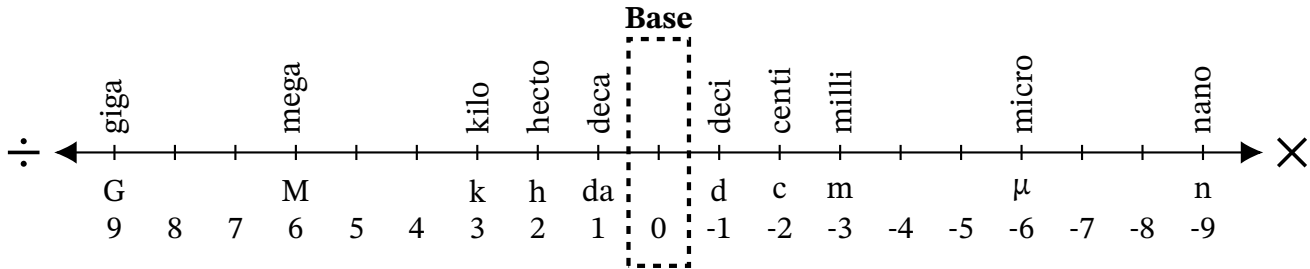
Converting Between mm^2 and cm^2 (C)

Name: _____

Date: _____

Score: _____ /10

Complete each conversion. Symbols for copying and pasting: $\times \div ^2 ^3$.



1. Convert 0.0082 cm^2 to mm^2
2. Convert 0.085 cm^2 to mm^2
3. Convert 0.593 cm^2 to mm^2
4. Convert $74,870,000 \text{ mm}^2$ to cm^2
5. Convert 201 mm^2 to cm^2
6. Convert 396 mm^2 to cm^2
7. Convert 0.0044 cm^2 to mm^2
8. Convert 6175 cm^2 to mm^2
9. Convert $271,600 \text{ mm}^2$ to cm^2
10. Convert $62,000 \text{ mm}^2$ to cm^2

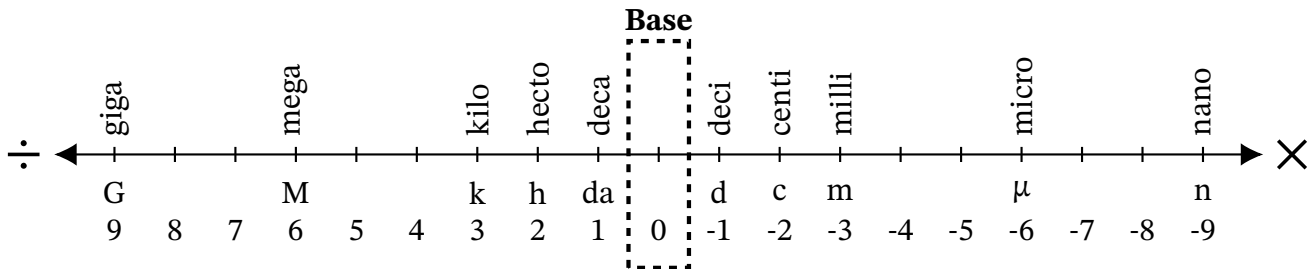
Converting Between mm² and cm² (C) Answers

Name: _____

Date: _____

Score: _____ /10

Complete each conversion. Symbols for copying and pasting: $\times \div ^2 ^3$.



1. Convert 0.0082 cm² to mm²

$$0.0082 \text{ cm}^2 \times 100 = 0.82 \text{ mm}^2$$

2. Convert 0.085 cm² to mm²

$$0.085 \text{ cm}^2 \times 100 = 8.5 \text{ mm}^2$$

3. Convert 0.593 cm² to mm²

$$0.593 \text{ cm}^2 \times 100 = 59.3 \text{ mm}^2$$

4. Convert 74,870,000 mm² to cm²

$$74,870,000 \text{ mm}^2 \div 100 = 748,700 \text{ cm}^2$$

5. Convert 201 mm² to cm²

$$201 \text{ mm}^2 \div 100 = 2.01 \text{ cm}^2$$

6. Convert 396 mm² to cm²

$$396 \text{ mm}^2 \div 100 = 3.96 \text{ cm}^2$$

7. Convert 0.0044 cm² to mm²

$$0.0044 \text{ cm}^2 \times 100 = 0.44 \text{ mm}^2$$

8. Convert 6175 cm² to mm²

$$6175 \text{ cm}^2 \times 100 = 617,500 \text{ mm}^2$$

9. Convert 271,600 mm² to cm²

$$271,600 \text{ mm}^2 \div 100 = 2716 \text{ cm}^2$$

10. Convert 62,000 mm² to cm²

$$62,000 \text{ mm}^2 \div 100 = 620 \text{ cm}^2$$

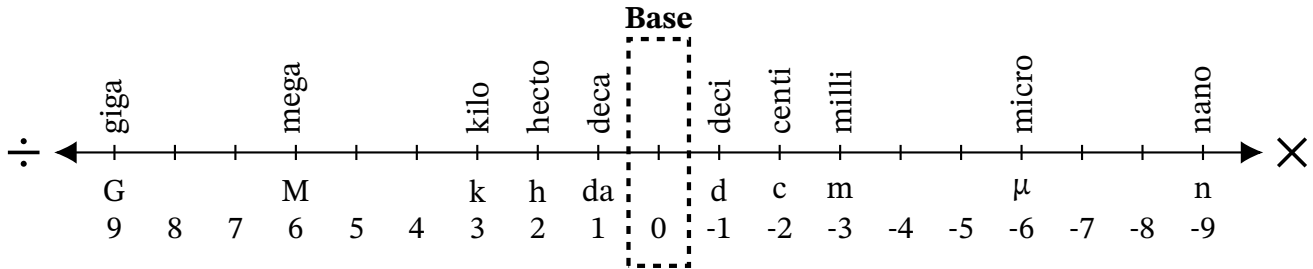
Converting Between mm^2 and cm^2 (D)

Name: _____

Date: _____

Score: _____ /10

Complete each conversion. Symbols for copying and pasting: $\times \div ^2 ^3$.



1. Convert 68.7 cm^2 to mm^2
2. Convert 0.069 cm^2 to mm^2
3. Convert 998 cm^2 to mm^2
4. Convert 1647 mm^2 to cm^2
5. Convert $1,573,000 \text{ mm}^2$ to cm^2
6. Convert 0.0554 cm^2 to mm^2
7. Convert $54,950 \text{ mm}^2$ to cm^2
8. Convert $64,630 \text{ mm}^2$ to cm^2
9. Convert $434,000 \text{ mm}^2$ to cm^2
10. Convert 43 cm^2 to mm^2

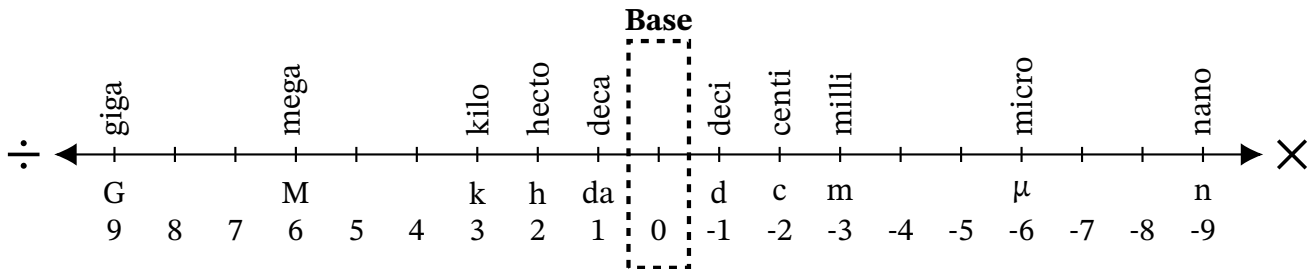
Converting Between mm² and cm² (D) Answers

Name: _____

Date: _____

Score: _____ /10

Complete each conversion. Symbols for copying and pasting: $\times \div ^2 ^3$.



1. Convert 68.7 cm² to mm²

$$68.7 \text{ cm}^2 \times 100 = 6870 \text{ mm}^2$$

2. Convert 0.069 cm² to mm²

$$0.069 \text{ cm}^2 \times 100 = 6.9 \text{ mm}^2$$

3. Convert 998 cm² to mm²

$$998 \text{ cm}^2 \times 100 = 99,800 \text{ mm}^2$$

4. Convert 1647 mm² to cm²

$$1647 \text{ mm}^2 \div 100 = 16.47 \text{ cm}^2$$

5. Convert 1,573,000 mm² to cm²

$$1,573,000 \text{ mm}^2 \div 100 = 15,730 \text{ cm}^2$$

6. Convert 0.0554 cm² to mm²

$$0.0554 \text{ cm}^2 \times 100 = 5.54 \text{ mm}^2$$

7. Convert 54,950 mm² to cm²

$$54,950 \text{ mm}^2 \div 100 = 549.5 \text{ cm}^2$$

8. Convert 64,630 mm² to cm²

$$64,630 \text{ mm}^2 \div 100 = 646.3 \text{ cm}^2$$

9. Convert 434,000 mm² to cm²

$$434,000 \text{ mm}^2 \div 100 = 4340 \text{ cm}^2$$

10. Convert 43 cm² to mm²

$$43 \text{ cm}^2 \times 100 = 4300 \text{ mm}^2$$

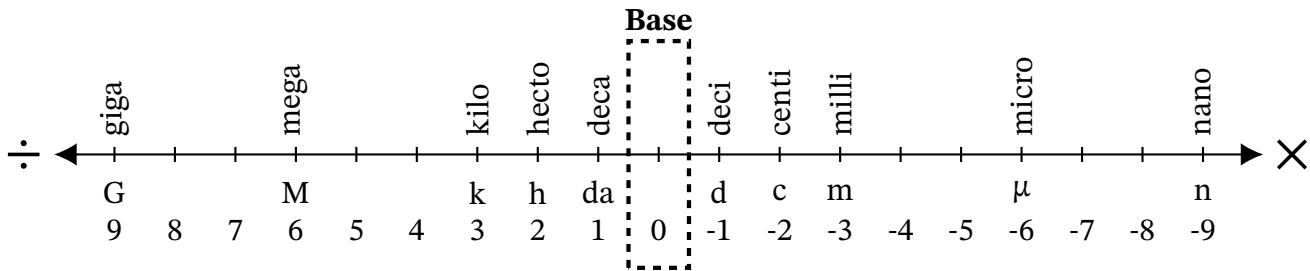
Converting Between mm^2 and cm^2 (E)

Name: _____

Date: _____

Score: _____ /10

Complete each conversion. Symbols for copying and pasting: $\times \div ^2 ^3$.



1. Convert 0.596 cm^2 to mm^2
2. Convert 2.7 cm^2 to mm^2
3. Convert $93,820 \text{ mm}^2$ to cm^2
4. Convert $680,000 \text{ mm}^2$ to cm^2
5. Convert 9580 mm^2 to cm^2
6. Convert $3,750,000 \text{ mm}^2$ to cm^2
7. Convert $96,000 \text{ mm}^2$ to cm^2
8. Convert 0.0044 cm^2 to mm^2
9. Convert 0.8949 cm^2 to mm^2
10. Convert 865 cm^2 to mm^2

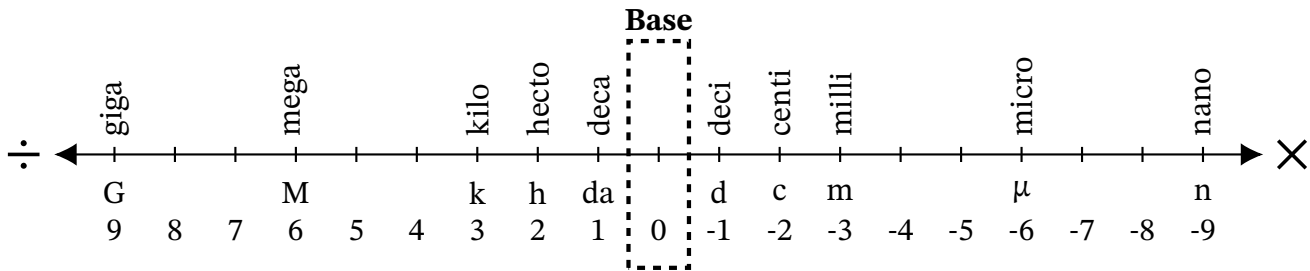
Converting Between mm² and cm² (E) Answers

Name: _____

Date: _____

Score: _____ /10

Complete each conversion. Symbols for copying and pasting: $\times \div ^2 ^3$.



1. Convert 0.596 cm² to mm²

$$0.596 \text{ cm}^2 \times 100 = 59.6 \text{ mm}^2$$

2. Convert 2.7 cm² to mm²

$$2.7 \text{ cm}^2 \times 100 = 270 \text{ mm}^2$$

3. Convert 93,820 mm² to cm²

$$93,820 \text{ mm}^2 \div 100 = 938.2 \text{ cm}^2$$

4. Convert 680,000 mm² to cm²

$$680,000 \text{ mm}^2 \div 100 = 6800 \text{ cm}^2$$

5. Convert 9580 mm² to cm²

$$9580 \text{ mm}^2 \div 100 = 95.8 \text{ cm}^2$$

6. Convert 3,750,000 mm² to cm²

$$3,750,000 \text{ mm}^2 \div 100 = 37,500 \text{ cm}^2$$

7. Convert 96,000 mm² to cm²

$$96,000 \text{ mm}^2 \div 100 = 960 \text{ cm}^2$$

8. Convert 0.0044 cm² to mm²

$$0.0044 \text{ cm}^2 \times 100 = 0.44 \text{ mm}^2$$

9. Convert 0.8949 cm² to mm²

$$0.8949 \text{ cm}^2 \times 100 = 89.49 \text{ mm}^2$$

10. Convert 865 cm² to mm²

$$865 \text{ cm}^2 \times 100 = 86,500 \text{ mm}^2$$

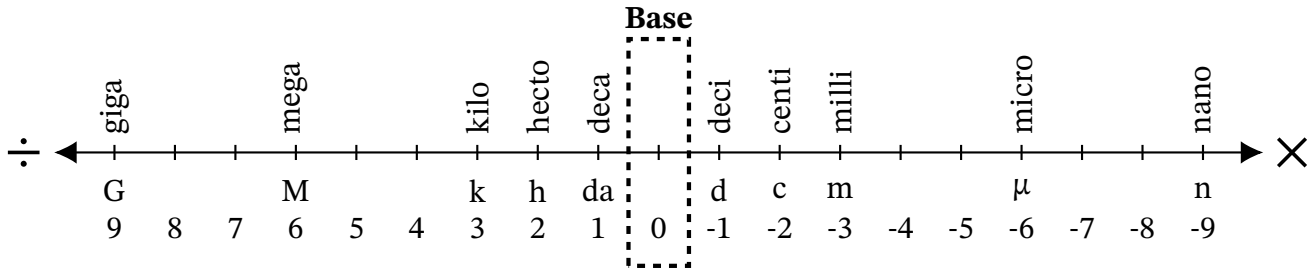
Converting Between mm^2 and cm^2 (F)

Name: _____

Date: _____

Score: _____ /10

Complete each conversion. Symbols for copying and pasting: $\times \div ^2 ^3$.



1. Convert $169,000 \text{ mm}^2$ to cm^2
2. Convert 0.75 cm^2 to mm^2
3. Convert 850 mm^2 to cm^2
4. Convert 5.46 cm^2 to mm^2
5. Convert 5500 mm^2 to cm^2
6. Convert 724 mm^2 to cm^2
7. Convert 0.7303 cm^2 to mm^2
8. Convert 5.649 cm^2 to mm^2
9. Convert 0.0713 cm^2 to mm^2
10. Convert 23 mm^2 to cm^2

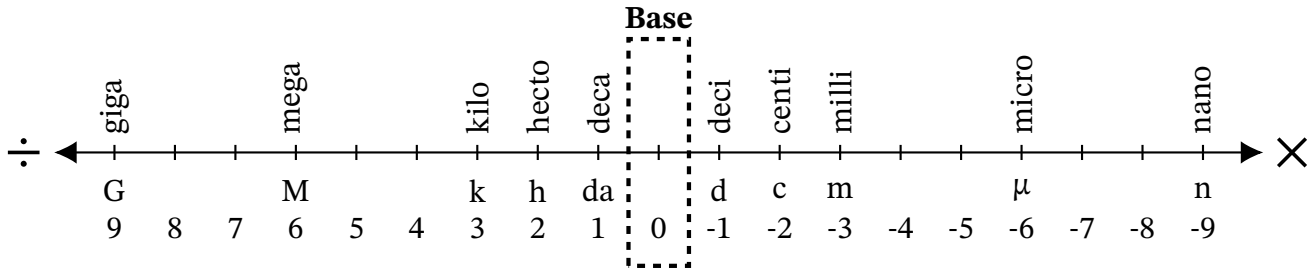
Converting Between mm² and cm² (F) Answers

Name: _____

Date: _____

Score: _____ /10

Complete each conversion. Symbols for copying and pasting: $\times \div ^2 ^3$.



1. Convert 169,000 mm² to cm²

$$169,000 \text{ mm}^2 \div 100 = 1690 \text{ cm}^2$$

2. Convert 0.75 cm² to mm²

$$0.75 \text{ cm}^2 \times 100 = 75 \text{ mm}^2$$

3. Convert 850 mm² to cm²

$$850 \text{ mm}^2 \div 100 = 8.5 \text{ cm}^2$$

4. Convert 5.46 cm² to mm²

$$5.46 \text{ cm}^2 \times 100 = 546 \text{ mm}^2$$

5. Convert 5500 mm² to cm²

$$5500 \text{ mm}^2 \div 100 = 55 \text{ cm}^2$$

6. Convert 724 mm² to cm²

$$724 \text{ mm}^2 \div 100 = 7.24 \text{ cm}^2$$

7. Convert 0.7303 cm² to mm²

$$0.7303 \text{ cm}^2 \times 100 = 73.03 \text{ mm}^2$$

8. Convert 5.649 cm² to mm²

$$5.649 \text{ cm}^2 \times 100 = 564.9 \text{ mm}^2$$

9. Convert 0.0713 cm² to mm²

$$0.0713 \text{ cm}^2 \times 100 = 7.13 \text{ mm}^2$$

10. Convert 23 mm² to cm²

$$23 \text{ mm}^2 \div 100 = 0.23 \text{ cm}^2$$

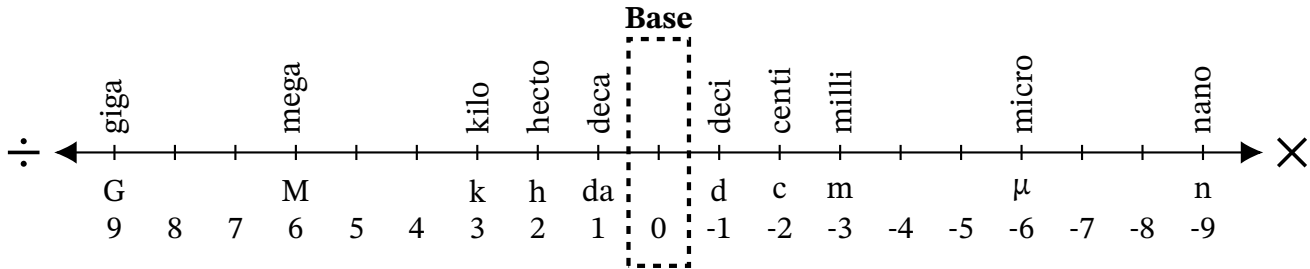
Converting Between mm^2 and cm^2 (G)

Name: _____

Date: _____

Score: _____ /10

Complete each conversion. Symbols for copying and pasting: $\times \div ^2 ^3$.



1. Convert $633,100 \text{ mm}^2$ to cm^2
2. Convert $64,000 \text{ mm}^2$ to cm^2
3. Convert 70.7 cm^2 to mm^2
4. Convert $87,800 \text{ mm}^2$ to cm^2
5. Convert $686,300 \text{ mm}^2$ to cm^2
6. Convert 0.032 cm^2 to mm^2
7. Convert 7400 mm^2 to cm^2
8. Convert 6.431 cm^2 to mm^2
9. Convert 0.13 cm^2 to mm^2
10. Convert 0.0019 cm^2 to mm^2

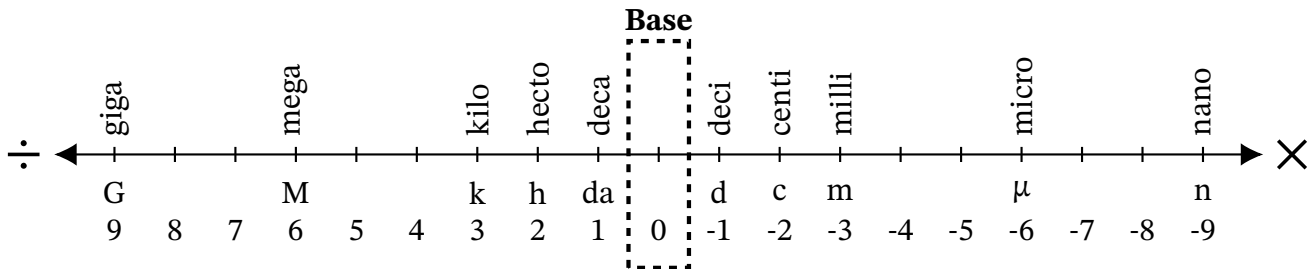
Converting Between mm² and cm² (G) Answers

Name: _____

Date: _____

Score: _____ /10

Complete each conversion. Symbols for copying and pasting: $\times \div 2^3$.



1. Convert 633,100 mm² to cm²

$$633,100 \text{ mm}^2 \div 100 = 6331 \text{ cm}^2$$

2. Convert 64,000 mm² to cm²

$$64,000 \text{ mm}^2 \div 100 = 640 \text{ cm}^2$$

3. Convert 70.7 cm² to mm²

$$70.7 \text{ cm}^2 \times 100 = 7070 \text{ mm}^2$$

4. Convert 87,800 mm² to cm²

$$87,800 \text{ mm}^2 \div 100 = 878 \text{ cm}^2$$

5. Convert 686,300 mm² to cm²

$$686,300 \text{ mm}^2 \div 100 = 6863 \text{ cm}^2$$

6. Convert 0.032 cm² to mm²

$$0.032 \text{ cm}^2 \times 100 = 3.2 \text{ mm}^2$$

7. Convert 7400 mm² to cm²

$$7400 \text{ mm}^2 \div 100 = 74 \text{ cm}^2$$

8. Convert 6.431 cm² to mm²

$$6.431 \text{ cm}^2 \times 100 = 643.1 \text{ mm}^2$$

9. Convert 0.13 cm² to mm²

$$0.13 \text{ cm}^2 \times 100 = 13 \text{ mm}^2$$

10. Convert 0.0019 cm² to mm²

$$0.0019 \text{ cm}^2 \times 100 = 0.19 \text{ mm}^2$$

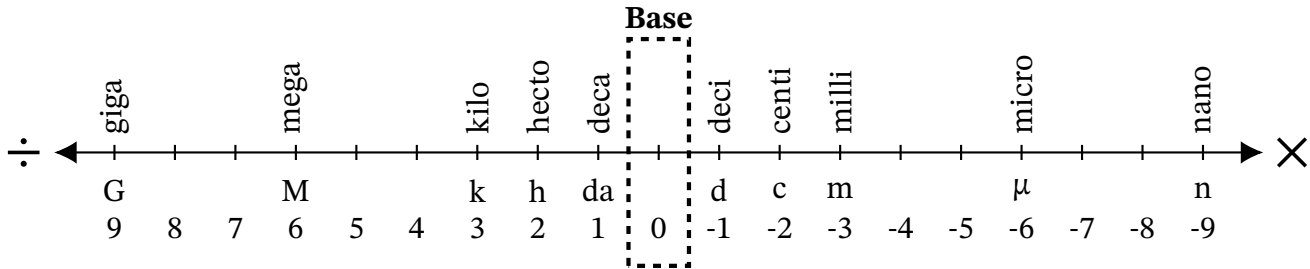
Converting Between mm^2 and cm^2 (H)

Name: _____

Date: _____

Score: _____ /10

Complete each conversion. Symbols for copying and pasting: $\times \div ^2 ^3$.



1. Convert $51,140 \text{ mm}^2$ to cm^2
2. Convert $9,187,000 \text{ mm}^2$ to cm^2
3. Convert 4238 cm^2 to mm^2
4. Convert 6.61 cm^2 to mm^2
5. Convert $824,000 \text{ mm}^2$ to cm^2
6. Convert 8.7 cm^2 to mm^2
7. Convert 0.0062 cm^2 to mm^2
8. Convert 0.0541 cm^2 to mm^2
9. Convert $963,000 \text{ mm}^2$ to cm^2
10. Convert 451 mm^2 to cm^2

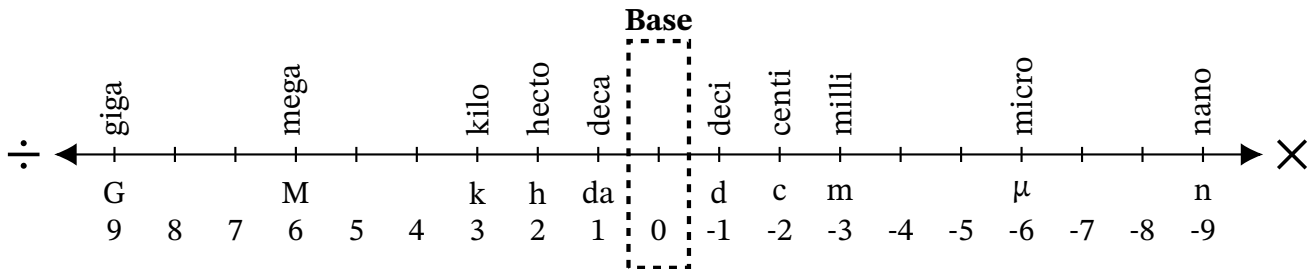
Converting Between mm² and cm² (H) Answers

Name: _____

Date: _____

Score: _____ /10

Complete each conversion. Symbols for copying and pasting: $\times \div ^2 ^3$.



1. Convert 51,140 mm² to cm²

$$51,140 \text{ mm}^2 \div 100 = 511.4 \text{ cm}^2$$

2. Convert 9,187,000 mm² to cm²

$$9,187,000 \text{ mm}^2 \div 100 = 91,870 \text{ cm}^2$$

3. Convert 4238 cm² to mm²

$$4238 \text{ cm}^2 \times 100 = 423,800 \text{ mm}^2$$

4. Convert 6.61 cm² to mm²

$$6.61 \text{ cm}^2 \times 100 = 661 \text{ mm}^2$$

5. Convert 824,000 mm² to cm²

$$824,000 \text{ mm}^2 \div 100 = 8240 \text{ cm}^2$$

6. Convert 8.7 cm² to mm²

$$8.7 \text{ cm}^2 \times 100 = 870 \text{ mm}^2$$

7. Convert 0.0062 cm² to mm²

$$0.0062 \text{ cm}^2 \times 100 = 0.62 \text{ mm}^2$$

8. Convert 0.0541 cm² to mm²

$$0.0541 \text{ cm}^2 \times 100 = 5.41 \text{ mm}^2$$

9. Convert 963,000 mm² to cm²

$$963,000 \text{ mm}^2 \div 100 = 9630 \text{ cm}^2$$

10. Convert 451 mm² to cm²

$$451 \text{ mm}^2 \div 100 = 4.51 \text{ cm}^2$$

Converting Between mm^2 and cm^2 (I)

Name: _____

Date: _____

Score: _____ /10

Complete each conversion. Symbols for copying and pasting: $\times \div ^2 ^3$.



1. Convert 0.33 cm^2 to mm^2
2. Convert $130,000 \text{ mm}^2$ to cm^2
3. Convert 0.61 cm^2 to mm^2
4. Convert $67,080 \text{ mm}^2$ to cm^2
5. Convert 454 cm^2 to mm^2
6. Convert 0.633 cm^2 to mm^2
7. Convert 0.0086 cm^2 to mm^2
8. Convert $6,020,000 \text{ mm}^2$ to cm^2
9. Convert $49,000 \text{ mm}^2$ to cm^2
10. Convert $600,300 \text{ mm}^2$ to cm^2

Converting Between mm² and cm² (I) Answers

Name: _____

Date: _____

Score: _____ /10

Complete each conversion. Symbols for copying and pasting: $\times \div ^2 ^3$.



1. Convert 0.33 cm² to mm²

$$0.33 \text{ cm}^2 \times 100 = 33 \text{ mm}^2$$

2. Convert 130,000 mm² to cm²

$$130,000 \text{ mm}^2 \div 100 = 1300 \text{ cm}^2$$

3. Convert 0.61 cm² to mm²

$$0.61 \text{ cm}^2 \times 100 = 61 \text{ mm}^2$$

4. Convert 67,080 mm² to cm²

$$67,080 \text{ mm}^2 \div 100 = 670.8 \text{ cm}^2$$

5. Convert 454 cm² to mm²

$$454 \text{ cm}^2 \times 100 = 45,400 \text{ mm}^2$$

6. Convert 0.633 cm² to mm²

$$0.633 \text{ cm}^2 \times 100 = 63.3 \text{ mm}^2$$

7. Convert 0.0086 cm² to mm²

$$0.0086 \text{ cm}^2 \times 100 = 0.86 \text{ mm}^2$$

8. Convert 6,020,000 mm² to cm²

$$6,020,000 \text{ mm}^2 \div 100 = 60,200 \text{ cm}^2$$

9. Convert 49,000 mm² to cm²

$$49,000 \text{ mm}^2 \div 100 = 490 \text{ cm}^2$$

10. Convert 600,300 mm² to cm²

$$600,300 \text{ mm}^2 \div 100 = 6003 \text{ cm}^2$$

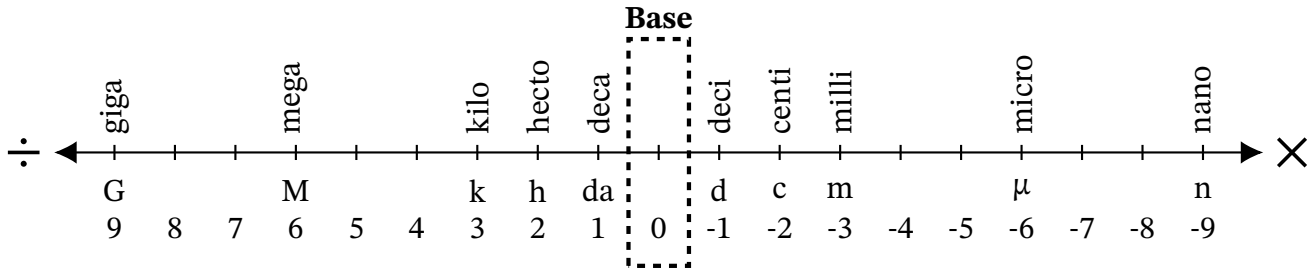
Converting Between mm^2 and cm^2 (J)

Name: _____

Date: _____

Score: _____ /10

Complete each conversion. Symbols for copying and pasting: $\times \div ^2 ^3$.



1. Convert $552,900 \text{ mm}^2$ to cm^2
2. Convert 7.2 cm^2 to mm^2
3. Convert $124,000 \text{ mm}^2$ to cm^2
4. Convert $988,000 \text{ mm}^2$ to cm^2
5. Convert 58.2 cm^2 to mm^2
6. Convert $1,076,000 \text{ mm}^2$ to cm^2
7. Convert 38.2 cm^2 to mm^2
8. Convert 36.6 cm^2 to mm^2
9. Convert 5207 cm^2 to mm^2
10. Convert $11,310 \text{ mm}^2$ to cm^2

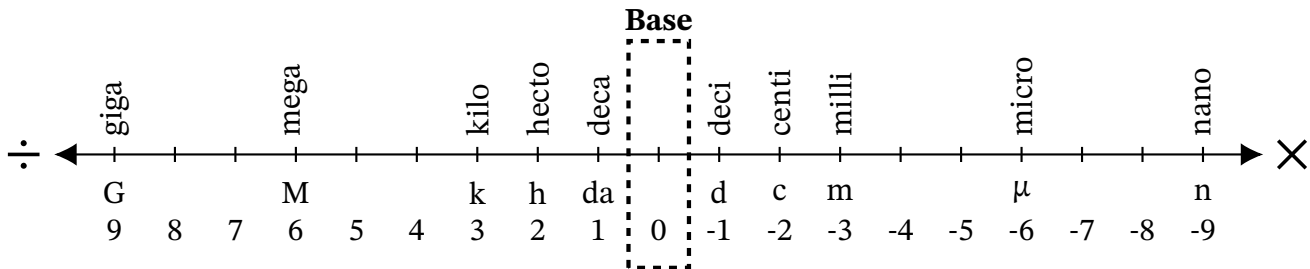
Converting Between mm² and cm² (J) Answers

Name: _____

Date: _____

Score: _____ /10

Complete each conversion. Symbols for copying and pasting: $\times \div 2^3$.



1. Convert 552,900 mm² to cm²

$$552,900 \text{ mm}^2 \div 100 = 5529 \text{ cm}^2$$

2. Convert 7.2 cm² to mm²

$$7.2 \text{ cm}^2 \times 100 = 720 \text{ mm}^2$$

3. Convert 124,000 mm² to cm²

$$124,000 \text{ mm}^2 \div 100 = 1240 \text{ cm}^2$$

4. Convert 988,000 mm² to cm²

$$988,000 \text{ mm}^2 \div 100 = 9880 \text{ cm}^2$$

5. Convert 58.2 cm² to mm²

$$58.2 \text{ cm}^2 \times 100 = 5820 \text{ mm}^2$$

6. Convert 1,076,000 mm² to cm²

$$1,076,000 \text{ mm}^2 \div 100 = 10,760 \text{ cm}^2$$

7. Convert 38.2 cm² to mm²

$$38.2 \text{ cm}^2 \times 100 = 3820 \text{ mm}^2$$

8. Convert 36.6 cm² to mm²

$$36.6 \text{ cm}^2 \times 100 = 3660 \text{ mm}^2$$

9. Convert 5207 cm² to mm²

$$5207 \text{ cm}^2 \times 100 = 520,700 \text{ mm}^2$$

10. Convert 11,310 mm² to cm²

$$11,310 \text{ mm}^2 \div 100 = 113.1 \text{ cm}^2$$