

# Next Dollar Up (A)

Name: \_\_\_\_\_

Date: \_\_\_\_\_

How many dollars do you need for each amount?



1. \$7.94

11. \$1.99

2. \$3.91

12. \$6.96

3. \$4.93

13. \$6.23

4. \$8.43

14. \$7.16

5. \$0.32

15. \$9.74

6. \$9.02

16. \$3.34

7. \$0.74

17. \$5.96

8. \$5.19

18. \$1.25

9. \$8.56

19. \$2.49

10. \$4.50

20. \$2.71

Coin image ©2015 Royal Canadian Mint -- All Rights Reserved

# Next Dollar Up (A) Answers

Name: \_\_\_\_\_

Date: \_\_\_\_\_

How many dollars do you need for each amount?



1. \$7.94

\$8

11. \$1.99

\$2

2. \$3.91

\$4

12. \$6.96

\$7

3. \$4.93

\$5

13. \$6.23

\$7

4. \$8.43

\$9

14. \$7.16

\$8

5. \$0.32

\$1

15. \$9.74

\$10

6. \$9.02

\$10

16. \$3.34

\$4

7. \$0.74

\$1

17. \$5.96

\$6

8. \$5.19

\$6

18. \$1.25

\$2

9. \$8.56

\$9

19. \$2.49

\$3

10. \$4.50

\$5

20. \$2.71

\$3

Coin image ©2015 Royal Canadian Mint -- All Rights Reserved

# Next Dollar Up (B)

Name: \_\_\_\_\_

Date: \_\_\_\_\_

How many dollars do you need for each amount?



1. \$8.84

11. \$0.73

2. \$6.33

12. \$0.17

3. \$7.29

13. \$6.69

4. \$4.81

14. \$2.23

5. \$8.12

15. \$1.85

6. \$3.12

16. \$9.18

7. \$7.90

17. \$5.73

8. \$9.94

18. \$1.06

9. \$5.48

19. \$2.78

10. \$4.26

20. \$3.88


Coin image ©2015 Royal Canadian Mint -- All Rights Reserved

# Next Dollar Up (B) Answers

Name: \_\_\_\_\_

Date: \_\_\_\_\_

How many dollars do you need for each amount?

									
\$1	\$2	\$3	\$4	\$5	\$6	\$7	\$8	\$9	\$10

- |            |      |            |      |
|------------|------|------------|------|
| 1. \$8.84  | \$9  | 11. \$0.73 | \$1  |
| 2. \$6.33  | \$7  | 12. \$0.17 | \$1  |
| 3. \$7.29  | \$8  | 13. \$6.69 | \$7  |
| 4. \$4.81  | \$5  | 14. \$2.23 | \$3  |
| 5. \$8.12  | \$9  | 15. \$1.85 | \$2  |
| 6. \$3.12  | \$4  | 16. \$9.18 | \$10 |
| 7. \$7.90  | \$8  | 17. \$5.73 | \$6  |
| 8. \$9.94  | \$10 | 18. \$1.06 | \$2  |
| 9. \$5.48  | \$6  | 19. \$2.78 | \$3  |
| 10. \$4.26 | \$5  | 20. \$3.88 | \$4  |

Coin image ©2015 Royal Canadian Mint -- All Rights Reserved

# Next Dollar Up (C)

Name: \_\_\_\_\_

Date: \_\_\_\_\_

How many dollars do you need for each amount?



1. \$2.57

11. \$0.72

2. \$0.02

12. \$3.79

3. \$5.34

13. \$7.98

4. \$6.37

14. \$3.35

5. \$1.32

15. \$6.83

6. \$4.31

16. \$5.58

7. \$4.56

17. \$9.74

8. \$8.35

18. \$8.80

9. \$7.46

19. \$1.74

10. \$2.40

20. \$9.28

Coin image ©2015 Royal Canadian Mint -- All Rights Reserved

# Next Dollar Up (C) Answers

Name: \_\_\_\_\_

Date: \_\_\_\_\_

How many dollars do you need for each amount?

									
\$1	\$2	\$3	\$4	\$5	\$6	\$7	\$8	\$9	\$10

1. \$2.57

\$3

11. \$0.72

\$1

2. \$0.02

\$1

12. \$3.79

\$4

3. \$5.34

\$6

13. \$7.98

\$8

4. \$6.37

\$7

14. \$3.35

\$4

5. \$1.32

\$2

15. \$6.83

\$7

6. \$4.31

\$5

16. \$5.58

\$6

7. \$4.56

\$5

17. \$9.74

\$10

8. \$8.35

\$9

18. \$8.80

\$9

9. \$7.46

\$8

19. \$1.74

\$2

10. \$2.40

\$3

20. \$9.28

\$10

Coin image ©2015 Royal Canadian Mint -- All Rights Reserved

# Next Dollar Up (D)

Name: \_\_\_\_\_

Date: \_\_\_\_\_

How many dollars do you need for each amount?



1. \$4.57

11. \$3.71

2. \$2.17

12. \$2.74

3. \$8.12

13. \$6.42

4. \$0.57

14. \$5.16

5. \$9.08

15. \$7.39

6. \$1.64

16. \$5.87

7. \$4.30

17. \$1.16

8. \$9.61

18. \$0.14

9. \$6.97

19. \$3.38

10. \$7.79

20. \$8.86

Coin image ©2015 Royal Canadian Mint -- All Rights Reserved

# Next Dollar Up (D) Answers

Name: \_\_\_\_\_

Date: \_\_\_\_\_

How many dollars do you need for each amount?

									
\$1	\$2	\$3	\$4	\$5	\$6	\$7	\$8	\$9	\$10

1. \$4.57

\$5

11. \$3.71

\$4

2. \$2.17

\$3

12. \$2.74

\$3

3. \$8.12

\$9

13. \$6.42

\$7

4. \$0.57

\$1

14. \$5.16

\$6

5. \$9.08

\$10

15. \$7.39

\$8

6. \$1.64

\$2

16. \$5.87

\$6

7. \$4.30

\$5

17. \$1.16

\$2

8. \$9.61

\$10

18. \$0.14

\$1

9. \$6.97

\$7

19. \$3.38

\$4

10. \$7.79

\$8

20. \$8.86

\$9

Coin image ©2015 Royal Canadian Mint -- All Rights Reserved



# Next Dollar Up (E)

Name: \_\_\_\_\_

Date: \_\_\_\_\_

How many dollars do you need for each amount?



1. \$7.80

11. \$6.83

2. \$0.03

12. \$4.04

3. \$9.93

13. \$5.77

4. \$6.04

14. \$2.40

5. \$5.26

15. \$9.03

6. \$1.37

16. \$3.62

7. \$1.00

17. \$8.33

8. \$8.84

18. \$3.11

9. \$1.89

19. \$2.79

10. \$4.59

20. \$7.40

Coin image ©2015 Royal Canadian Mint -- All Rights Reserved

# Next Dollar Up (E) Answers

Name: \_\_\_\_\_

Date: \_\_\_\_\_

How many dollars do you need for each amount?

									
\$1	\$2	\$3	\$4	\$5	\$6	\$7	\$8	\$9	\$10

1. \$7.80

\$8

11. \$6.83

\$7

2. \$0.03

\$1

12. \$4.04

\$5

3. \$9.93

\$10

13. \$5.77

\$6

4. \$6.04

\$7

14. \$2.40

\$3

5. \$5.26

\$6

15. \$9.03

\$10

6. \$1.37

\$2

16. \$3.62

\$4

7. \$1.00

\$1

17. \$8.33

\$9

8. \$8.84

\$9

18. \$3.11

\$4

9. \$1.89

\$2

19. \$2.79

\$3

10. \$4.59

\$5

20. \$7.40

\$8

Coin image ©2015 Royal Canadian Mint -- All Rights Reserved

# Next Dollar Up (F)

Name: \_\_\_\_\_

Date: \_\_\_\_\_

How many dollars do you need for each amount?



- |            |                      |            |                      |
|------------|----------------------|------------|----------------------|
| 1. \$2.90  | <input type="text"/> | 11. \$9.93 | <input type="text"/> |
| 2. \$5.73  | <input type="text"/> | 12. \$2.41 | <input type="text"/> |
| 3. \$4.21  | <input type="text"/> | 13. \$6.93 | <input type="text"/> |
| 4. \$0.54  | <input type="text"/> | 14. \$1.18 | <input type="text"/> |
| 5. \$4.57  | <input type="text"/> | 15. \$3.49 | <input type="text"/> |
| 6. \$5.16  | <input type="text"/> | 16. \$8.96 | <input type="text"/> |
| 7. \$9.20  | <input type="text"/> | 17. \$3.75 | <input type="text"/> |
| 8. \$8.16  | <input type="text"/> | 18. \$7.31 | <input type="text"/> |
| 9. \$7.54  | <input type="text"/> | 19. \$6.35 | <input type="text"/> |
| 10. \$1.82 | <input type="text"/> | 20. \$0.26 | <input type="text"/> |


Coin image ©2015 Royal Canadian Mint -- All Rights Reserved

# Next Dollar Up (F) Answers

Name: \_\_\_\_\_

Date: \_\_\_\_\_

How many dollars do you need for each amount?

									
\$1	\$2	\$3	\$4	\$5	\$6	\$7	\$8	\$9	\$10

- |            |      |            |      |
|------------|------|------------|------|
| 1. \$2.90  | \$3  | 11. \$9.93 | \$10 |
| 2. \$5.73  | \$6  | 12. \$2.41 | \$3  |
| 3. \$4.21  | \$5  | 13. \$6.93 | \$7  |
| 4. \$0.54  | \$1  | 14. \$1.18 | \$2  |
| 5. \$4.57  | \$5  | 15. \$3.49 | \$4  |
| 6. \$5.16  | \$6  | 16. \$8.96 | \$9  |
| 7. \$9.20  | \$10 | 17. \$3.75 | \$4  |
| 8. \$8.16  | \$9  | 18. \$7.31 | \$8  |
| 9. \$7.54  | \$8  | 19. \$6.35 | \$7  |
| 10. \$1.82 | \$2  | 20. \$0.26 | \$1  |

Coin image ©2015 Royal Canadian Mint -- All Rights Reserved

# Next Dollar Up (G)

Name: \_\_\_\_\_

Date: \_\_\_\_\_

How many dollars do you need for each amount?



- |            |                      |            |                      |
|------------|----------------------|------------|----------------------|
| 1. \$0.16  | <input type="text"/> | 11. \$1.21 | <input type="text"/> |
| 2. \$2.39  | <input type="text"/> | 12. \$6.70 | <input type="text"/> |
| 3. \$4.53  | <input type="text"/> | 13. \$3.32 | <input type="text"/> |
| 4. \$2.00  | <input type="text"/> | 14. \$2.60 | <input type="text"/> |
| 5. \$4.16  | <input type="text"/> | 15. \$8.37 | <input type="text"/> |
| 6. \$9.50  | <input type="text"/> | 16. \$5.67 | <input type="text"/> |
| 7. \$8.59  | <input type="text"/> | 17. \$5.35 | <input type="text"/> |
| 8. \$7.89  | <input type="text"/> | 18. \$9.77 | <input type="text"/> |
| 9. \$6.08  | <input type="text"/> | 19. \$0.78 | <input type="text"/> |
| 10. \$4.00 | <input type="text"/> | 20. \$7.05 | <input type="text"/> |

Coin image ©2015 Royal Canadian Mint -- All Rights Reserved

# Next Dollar Up (G) Answers

Name: \_\_\_\_\_

Date: \_\_\_\_\_

How many dollars do you need for each amount?

									
\$1	\$2	\$3	\$4	\$5	\$6	\$7	\$8	\$9	\$10

1. \$0.16

\$1

11. \$1.21

\$2

2. \$2.39

\$3

12. \$6.70

\$7

3. \$4.53

\$5

13. \$3.32

\$4

4. \$2.00

\$2

14. \$2.60

\$3

5. \$4.16

\$5

15. \$8.37

\$9

6. \$9.50

\$10

16. \$5.67

\$6

7. \$8.59

\$9

17. \$5.35

\$6

8. \$7.89

\$8

18. \$9.77

\$10

9. \$6.08

\$7

19. \$0.78

\$1

10. \$4.00

\$4

20. \$7.05

\$8

Coin image ©2015 Royal Canadian Mint -- All Rights Reserved

# Next Dollar Up (H)

Name: \_\_\_\_\_

Date: \_\_\_\_\_

How many dollars do you need for each amount?



1. \$9.86

11. \$0.04

2. \$2.49

12. \$4.28

3. \$8.91

13. \$0.96

4. \$8.33

14. \$7.11

5. \$3.33

15. \$5.89

6. \$4.98

16. \$6.97

7. \$3.76

17. \$6.39

8. \$1.66

18. \$1.18

9. \$7.72

19. \$5.07

10. \$9.39

20. \$2.91






Coin image ©2015 Royal Canadian Mint -- All Rights Reserved

# Next Dollar Up (H) Answers

Name: \_\_\_\_\_

Date: \_\_\_\_\_

How many dollars do you need for each amount?

									
\$1	\$2	\$3	\$4	\$5	\$6	\$7	\$8	\$9	\$10

- |            |      |            |     |
|------------|------|------------|-----|
| 1. \$9.86  | \$10 | 11. \$0.04 | \$1 |
| 2. \$2.49  | \$3  | 12. \$4.28 | \$5 |
| 3. \$8.91  | \$9  | 13. \$0.96 | \$1 |
| 4. \$8.33  | \$9  | 14. \$7.11 | \$8 |
| 5. \$3.33  | \$4  | 15. \$5.89 | \$6 |
| 6. \$4.98  | \$5  | 16. \$6.97 | \$7 |
| 7. \$3.76  | \$4  | 17. \$6.39 | \$7 |
| 8. \$1.66  | \$2  | 18. \$1.18 | \$2 |
| 9. \$7.72  | \$8  | 19. \$5.07 | \$6 |
| 10. \$9.39 | \$10 | 20. \$2.91 | \$3 |

Coin image ©2015 Royal Canadian Mint -- All Rights Reserved



# Next Dollar Up (I)

Name: \_\_\_\_\_

Date: \_\_\_\_\_

How many dollars do you need for each amount?



1. \$8.93

11. \$3.98

2. \$1.90

12. \$6.96

3. \$6.23

13. \$9.38

4. \$0.46

14. \$5.97

5. \$7.23

15. \$2.08

6. \$4.92

16. \$1.41

7. \$4.25

17. \$9.79

8. \$2.70

18. \$5.48

9. \$8.29

19. \$7.97

10. \$0.71

20. \$3.39

Coin image ©2015 Royal Canadian Mint -- All Rights Reserved

# Next Dollar Up (I) Answers

Name: \_\_\_\_\_

Date: \_\_\_\_\_

How many dollars do you need for each amount?

									
\$1	\$2	\$3	\$4	\$5	\$6	\$7	\$8	\$9	\$10

1. \$8.93

\$9

11. \$3.98

\$4

2. \$1.90

\$2

12. \$6.96

\$7

3. \$6.23

\$7

13. \$9.38

\$10

4. \$0.46

\$1

14. \$5.97

\$6

5. \$7.23

\$8

15. \$2.08

\$3

6. \$4.92

\$5

16. \$1.41

\$2

7. \$4.25

\$5

17. \$9.79

\$10

8. \$2.70

\$3

18. \$5.48

\$6

9. \$8.29

\$9

19. \$7.97

\$8

10. \$0.71

\$1

20. \$3.39

\$4

Coin image ©2015 Royal Canadian Mint -- All Rights Reserved

# Next Dollar Up (J)

Name: \_\_\_\_\_

Date: \_\_\_\_\_

How many dollars do you need for each amount?



1. \$0.55

11. \$8.25

2. \$9.34

12. \$3.07

3. \$5.93

13. \$6.63

4. \$0.29

14. \$2.75

5. \$1.39

15. \$5.39

6. \$9.59

16. \$1.99

7. \$4.55

17. \$8.97

8. \$6.44

18. \$7.14

9. \$3.75

19. \$2.26

10. \$7.66

20. \$4.43


Coin image ©2015 Royal Canadian Mint -- All Rights Reserved

# Next Dollar Up (J) Answers

Name: \_\_\_\_\_

Date: \_\_\_\_\_

How many dollars do you need for each amount?

									
\$1	\$2	\$3	\$4	\$5	\$6	\$7	\$8	\$9	\$10

1. \$0.55

\$1

11. \$8.25

\$9

2. \$9.34

\$10

12. \$3.07

\$4

3. \$5.93

\$6

13. \$6.63

\$7

4. \$0.29

\$1

14. \$2.75

\$3

5. \$1.39

\$2

15. \$5.39

\$6

6. \$9.59

\$10

16. \$1.99

\$2

7. \$4.55

\$5

17. \$8.97

\$9

8. \$6.44

\$7

18. \$7.14

\$8

9. \$3.75

\$4

19. \$2.26

\$3

10. \$7.66

\$8

20. \$4.43

\$5

Coin image ©2015 Royal Canadian Mint -- All Rights Reserved