

# Counting Australian Coins (A)

What is the value of each set of coins?

1.



\_\_\_\_\_

2.



\_\_\_\_\_

3.



\_\_\_\_\_

# Counting Australian Coins (A) Answers

What is the value of each set of coins?

1.




\$7.55

2.



\$8.30

3.



\$10.70

# Counting Australian Coins (B)

What is the value of each set of coins?

1.



\_\_\_\_\_

2.



\_\_\_\_\_

3.



\_\_\_\_\_

# Counting Australian Coins (B) Answers

What is the value of each set of coins?

1.



\$8.80

2.



\$10.35

3.



\$10.85

# Counting Australian Coins (C)

What is the value of each set of coins?

1.



\_\_\_\_\_

2.



\_\_\_\_\_

3.



\_\_\_\_\_



# Counting Australian Coins (C) Answers

What is the value of each set of coins?

1.



\$6.15

2.



\$8.85

3.



\$8.55

# Counting Australian Coins (D)

What is the value of each set of coins?

1.



\_\_\_\_\_

2.



\_\_\_\_\_

3.




\_\_\_\_\_

# Counting Australian Coins (D) Answers

What is the value of each set of coins?

1.



\$7.70

2.



\$9.40

3.



\$8.90



# Counting Australian Coins (E)

What is the value of each set of coins?

1.



\_\_\_\_\_

2.



\_\_\_\_\_

3.



\_\_\_\_\_

# Counting Australian Coins (E) Answers

What is the value of each set of coins?

1.



\$11.40

2.



\$6.05

3.



\$12.15

# Counting Australian Coins (F)


What is the value of each set of coins?

1.



\_\_\_\_\_

2.



\_\_\_\_\_

3.



\_\_\_\_\_

# Counting Australian Coins (F) Answers


What is the value of each set of coins?

1.



\$8.85

2.



\$10.85

3.



\$6.45

# Counting Australian Coins (G)

What is the value of each set of coins?

1.



\_\_\_\_\_

2.



\_\_\_\_\_

3.



\_\_\_\_\_



# Counting Australian Coins (G) Answers

What is the value of each set of coins?

1.



\$7.40

2.



\$9.75

3.



\$8.95

# Counting Australian Coins (H)

What is the value of each set of coins?

1.



\_\_\_\_\_

2.



\_\_\_\_\_

3.



\_\_\_\_\_

# Counting Australian Coins (H) Answers

What is the value of each set of coins?

1.



\$7.20

2.



\$9.25

3.



\$6.35

# Counting Australian Coins (I)

What is the value of each set of coins?

1.



\_\_\_\_\_

2.



\_\_\_\_\_

3.



\_\_\_\_\_

# Counting Australian Coins (I) Answers

What is the value of each set of coins?

1.



\$10.15

2.



\$6.95

3.



\$11.50



# Counting Australian Coins (J)

What is the value of each set of coins?

1.



\_\_\_\_\_

2.



\_\_\_\_\_

3.



\_\_\_\_\_

# Counting Australian Coins (J) Answers

What is the value of each set of coins?

1.



\$6.10

2.



\$6.70

3.



\$9.70