



# Counting British Coins (C)

What is the value of each set of coins?

1.



---

2.




---

# Counting British Coins (C) Answers

What is the value of each set of coins?

1.



**£41.83**

2.



**£37.14**