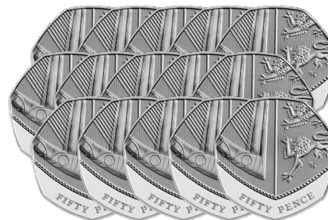


## Counting British Coins (B)



What is the value of each set of coins?

1.



\_\_\_\_\_

2.




\_\_\_\_\_

## Counting British Coins (B) Answers

What is the value of each set of coins?

1.



£10.16

2.



£6.72