




Counting British Coins (E)

What is the value of each set of coins?

1.




2.



Counting British Coins (E) Answers



What is the value of each set of coins?

1.



£8.68

2.



£10.52