


Counting British Coins (F)

What is the value of each set of coins?

1.




2.



Counting British Coins (F) Answers


What is the value of each set of coins?

1.



£6.79

2.



£7.75