



Counting British Coins (G)

What is the value of each set of coins?

1.





2.



Counting British Coins (G) Answers

What is the value of each set of coins?

1.



£12.74

2.



£5.46