


Counting British Coins (A)

What is the value of each set of coins?

1.




2.



Counting British Coins (A) Answers

What is the value of each set of coins?

1.



£11.60

2.



£6.97


Counting British Coins (B)

What is the value of each set of coins?

1.



2.



Counting British Coins (B) Answers



What is the value of each set of coins?

1.



£10.16

2.




£6.72

Counting British Coins (C)

What is the value of each set of coins?

1.




2.



Counting British Coins (C) Answers

What is the value of each set of coins?

1.



£12.07

2.




£10.05

Counting British Coins (D)

What is the value of each set of coins?

1.




2.



Counting British Coins (D) Answers

What is the value of each set of coins?

1.



£7.25

2.




£7.64


Counting British Coins (E)

What is the value of each set of coins?

1.




2.



Counting British Coins (E) Answers



What is the value of each set of coins?

1.



£8.68

2.



£10.52


Counting British Coins (F)

What is the value of each set of coins?

1.





2.



Counting British Coins (F) Answers


What is the value of each set of coins?

1.



£6.79

2.




£7.75

Counting British Coins (G)

What is the value of each set of coins?

1.





2.



Counting British Coins (G) Answers

What is the value of each set of coins?

1.



£12.74

2.



£5.46

Counting British Coins (H)

What is the value of each set of coins?

1.



2.



Counting British Coins (H) Answers

What is the value of each set of coins?

1.



£7.08

2.




£8.27

Counting British Coins (I)

What is the value of each set of coins?

1.




2.



Counting British Coins (I) Answers

What is the value of each set of coins?

1.



£10.23

2.




£10.36

Counting British Coins (J)

What is the value of each set of coins?

1.




2.



Counting British Coins (J) Answers

What is the value of each set of coins?

1.



£11.85

2.



£10.39