



# Counting U.S. Coins (A)

What is the value of each set of coins?

1.



\_\_\_\_\_

2.



\_\_\_\_\_

3.




\_\_\_\_\_

# Counting U.S. Coins (A) Answers

What is the value of each set of coins?

1.



\$5.53

2.



\$2.97

3.



\$4.93