

# Counting U.S. Coins (G)


What is the value of each set of coins?

1.





\_\_\_\_\_

2.



\_\_\_\_\_

3.



\_\_\_\_\_

# Counting U.S. Coins (G) Answers


What is the value of each set of coins?

1.




\$3.44

2.



\$3.86

3.



\$2.58