


Counting U.S. Coins (A)

What is the value of each set of coins?

1.



2.




3.



Counting U.S. Coins (A) Answers

What is the value of each set of coins?

1.



\$5.53

2.



\$2.97

3.





\$4.93

Counting U.S. Coins (B)

What is the value of each set of coins?


1.



2.





3.



Counting U.S. Coins (B) Answers

What is the value of each set of coins?

1.




\$4.94

2.



\$3.35

3.



\$5.16

Counting U.S. Coins (C)

What is the value of each set of coins?

1.



2.




3.



Counting U.S. Coins (C) Answers

What is the value of each set of coins?

1.



\$3.40

2.



\$3.21

3.



\$3.55

Counting U.S. Coins (D)

What is the value of each set of coins?


1.



2.



3.



Counting U.S. Coins (D) Answers

What is the value of each set of coins?

1.



\$4.08

2.



\$4.52

3.




\$3.95


Counting U.S. Coins (E)

What is the value of each set of coins?

1.



2.




3.



Counting U.S. Coins (E) Answers

What is the value of each set of coins?

1.



\$3.60

2.



\$4.18

3.




\$3.05

Counting U.S. Coins (F)

What is the value of each set of coins?

1.



2.




3.



Counting U.S. Coins (F) Answers

What is the value of each set of coins?

1.



\$4.91

2.



\$4.52

3.



\$2.93

Counting U.S. Coins (G)

What is the value of each set of coins?

1.



2.



3.



Counting U.S. Coins (G) Answers


What is the value of each set of coins?

1.




\$3.44

2.



\$3.86

3.




\$2.58

Counting U.S. Coins (H)

What is the value of each set of coins?

1.



2.




3.



Counting U.S. Coins (H) Answers

What is the value of each set of coins?

1.



\$4.50

2.



\$3.35

3.




\$5.67


Counting U.S. Coins (I)

What is the value of each set of coins?

1.



2.




3.



Counting U.S. Coins (I) Answers


What is the value of each set of coins?

1.




\$5.37

2.



\$5.35

3.




\$4.24

Counting U.S. Coins (J)

What is the value of each set of coins?

1.



2.




3.



Counting U.S. Coins (J) Answers


What is the value of each set of coins?

1.




\$4.05

2.



\$4.15

3.



\$3.13