

# Counting U.S. Coins (D)


What is the value of each set of coins?

1.




\_\_\_\_\_

2.



\_\_\_\_\_

3.



\_\_\_\_\_

# Counting U.S. Coins (D) Answers


What is the value of each set of coins?

1.




\$1.11

2.



\$1.08

3.



\$1.02