



# Counting U.S. Coins (E)

What is the value of each set of coins?

1.




\_\_\_\_\_

2.



\_\_\_\_\_

3.



\_\_\_\_\_