


# Counting U.S. Coins (H)


What is the value of each set of coins?

1.




\_\_\_\_\_

2.



\_\_\_\_\_

3.




\_\_\_\_\_

# Counting U.S. Coins (H) Answers

What is the value of each set of coins?

1.




\$1.07

2.



\$0.95

3.



\$1.47