



Counting U.S. Coins (J)

What is the value of each set of coins?

1.



2.



3.



Counting U.S. Coins (J) Answers



What is the value of each set of coins?

1.



\$0.76

2.



\$0.65

3.



\$1.70