

Making Change (E)

Calculate how much change is required for each transaction.

Cost of Items

Amount Paid

Change Required

1. \$3.10



\$5.00

2. \$1.71



\$5.00

3. \$0.04



\$5.00

4. \$1.50



\$5.00

5. \$4.06







\$5.00

Images used with the permission of the Bank of Canada.

Making Change (E) Answers

Calculate how much change is required for each transaction.

	<u>Cost of Items</u>	<u>Amount Paid</u>	<u>Change Required</u>
1.	\$3.10	 \$5.00	\$1.90
2.	\$1.71	 \$5.00	\$3.29
3.	\$0.04	 \$5.00	\$4.96
4.	\$1.50	 \$5.00	\$3.50
5.	\$4.06	 \$5.00	\$0.94

Images used with the permission of the Bank of Canada.